

Exam Date	10/12/2021
Exam Time :	12:30 PM - 2:00 PM
Subject	Constable GD 2021

Section : Part A General Intelligence and Reasoning

**Q.1** Select the letter-cluster from among the given options that can replace the question mark (?) in the following series.

BZCA, EXFY, HVIW, KTLU, ?

- Ans
- 1. ORNP
  - 2. NRPS
  - 3. NROS
  - 4. RNPO

www.shikarat.com

**Q.2** Select the option that is related to the third number in the same way as the second number is related to the first number and the sixth number is related to the fifth number.

13: 156 :: 18: ? :: 17 : 272

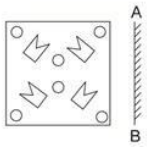
- Ans
- 1. 305
  - 2. 306
  - 3. 307
  - 4. 308

**Q.3** In a certain code language, 'GLOBE' is written as 'KPKFA'. How will 'DRINK' be written in that language?

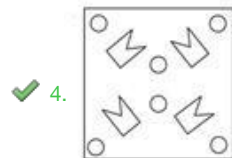
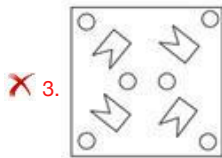
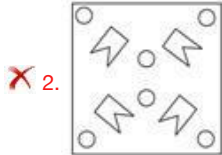
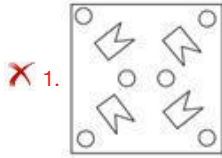
- Ans
- 1. HNEJO
  - 2. ZRVMG
  - 3. HVERO
  - 4. ZVMRG

www.shikarat.com

Q.4 Select the correct mirror image of the given figure when the mirror is placed at 'AB' as shown.



Ans



www.shikarat.com

Q.5 If 'A' denotes 'addition', 'B' denotes 'multiplication', 'C' denotes 'subtraction' and 'D' denotes 'division', then what will be the value of the following expression?

483 D 23 A 93 C 16 B 4

- Ans
- ✗ 1. 67
  - ✗ 2. 60
  - ✗ 3. 57
  - ✓ 4. 50

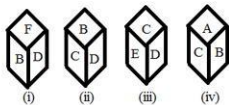
Q.6 Four letter-clusters have been given, out of which three are alike in some manner and one is different. Select the letter-cluster that is different.

- Ans
- ✗ 1. FGHE
  - ✗ 2. BCDA
  - ✗ 3. HIJG
  - ✓ 4. STUV

Q.7 In a certain code language, 'CROW' is coded as '3-18-15-23' and 'FISH' is coded as '6-9-19-8'. How will 'BULL' be coded in that language?

- Ans
- 1. 3-20-11-11
  - 2. 2-22-13-13
  - 3. 2-22-12-12
  - 4. 2-21-12-12

Q.8 Four different positions of the same dice are shown. Select the letter that will be on the face opposite to the face having the letter 'B'.



- Ans
- 1. E
  - 2. C
  - 3. D
  - 4. F

www.shikarat.com

Q.9 Select the number from among the given options that can replace the question mark (?) in the following series.

6, 54, 378, 1890, ?

- Ans
- 1. 5670
  - 2. 6811
  - 3. 4236
  - 4. 6002

Q.10 Study the given pattern carefully and select the number that can replace the question mark (?) in it.

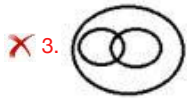
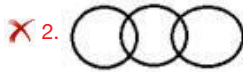
5 17 61  
6 21 75  
8 ? 103

- Ans
- 1. 27
  - 2. 29
  - 3. 21
  - 4. 23

**Q.11** Select the Venn diagram that best illustrates the relationship between the following classes.

Civics, Subject, Chemistry

**Ans**



**Q.12** Select the number from among the given options that can replace the question mark (?) in the following series.

241, 258, 275, 292, ?

**Ans** ✗ 1. 299

✗ 2. 325

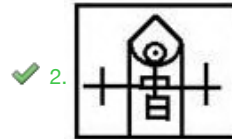
✗ 3. 313

✓ 4. 309

Q.13 Select the option in which the given figure is embedded (rotation is NOT allowed).



Ans



Q.14 Read the given statements and conclusions carefully. Assuming that the information given in the statements is true, even if it appears to be at variance with commonly known facts, decide which of the given conclusions logically follow(s) from the statements.

Statements:  
All belts are shoes.  
All shoes are caps.  
Some hats are caps.

Conclusions:  
I. Some caps are belts.  
II. Some hats are shoes.  
III. All shoes are belts.

Ans ✓ 1. Only conclusion I follows

www.shikarat.com

✗ 2. Only conclusions I and II follow

✗ 3. Only conclusions I and III follow

✗ 4. Only conclusion II follows

Q.15 In a certain code language, CLOUD is written as DMNTE, and MANGO is written as NZOHN. How will PASTEUR be written in that language?

- Ans  1. UTBQSVF  
 2. QZTUDTS  
 3. QZRSVDS  
 4. QBTUFVS

Q.16 If 'A % B' means 'A is the daughter of B', 'A & B' means 'A is the wife of B', and 'A # B' means 'A is the son of B', then how is G related to Z in the expression V % G & H # L & Z?

- Ans  1. Sister-in-law  
 2. Daughter-in-law  
 3. Daughter  
 4. Maternal aunt

Q.17 Six professional interior designers, Pavan, Nayan, Ratan, Shiva, Tanuja and Urmila, are sitting around a hexagonal table, each at one corner, and are facing the centre of the hexagonal table. Pavan is second to the left of Urmila. Nayan is the neighbour of Ratan and Shiva. Tanuja is second to the left of Shiva. Who among the following are the neighbours of Pavan?

- Ans  1. Urmila and Ratan  
 2. Tanuja and Ratan  
 3. Urmila and Tanuja  
 4. Shiva and Nayan

Q.18 'Mouse' is related to 'Computer' in the same way as 'Flash' is related to '\_\_\_\_\_'.  
Ans  1. Camera  
 2. Sparkle  
 3. Card  
 4. Printer

Q.19 Select the option that is related to the third term in the same way as the second term is related to the first term.

PLUM : KOFN :: MIST : ?

- Ans
- 1. NRFH
  - 2. ROGH
  - 3. NRHG
  - 4. ORGH

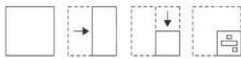
www.shikarat.com

Q.20 Select the combination of letters that when sequentially placed in the blanks of the given series will complete the series.

L P \_ S T \_ \_ Q \_ T L \_ \_ S T

- Ans
- 1. QLPSPQ
  - 2. PQSLSP
  - 3. PQLQLP
  - 4. LQPQSP

Q.21 The sequence of folding a piece of paper and the manner in which the folded paper has been cut is shown in the following figures. How would this paper look when unfolded?



- Ans
- 1.
  - 2.
  - 3.
  - 4.

Q.22 Manoj starts from his home and reaches the temple in 7 hours. He travels  $\frac{1}{4}$  th of the total distance at a speed of 10 km/h and the remaining distance at 12 km/h. Find the distance between his home and the temple.

- Ans
- 1. 80 km
  - 2. 90 km
  - 3. 70 km
  - 4. 72 km

**Q.23** Select the correct option that indicates the arrangement of the given words in the order in which they appear in an English dictionary.

1. Mischievous
2. Miscreant
3. Millennium
4. Misconception
5. Millionaire

- Ans**
- 1. 1, 2, 3, 4, 5
  - 2. 3, 5, 1, 2, 4
  - 3. 3, 5, 2, 4, 1
  - 4. 3, 5, 1, 4, 2

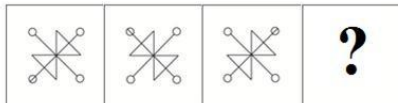
**Q.24** Five persons are standing in a row facing north. G is standing at the second place to the right of J. H is not next to K. If M is standing second from the extreme right, then who is standing at the extreme left end of the row?

- Ans**
- 1. K
  - 2. M
  - 3. G
  - 4. J



Select the figure from among the given options that can replace the question mark (?) in the following series.

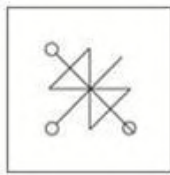
Q.25



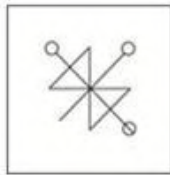
www.shikarat.com

Ans

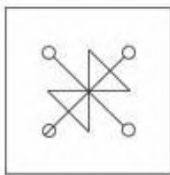
✗ 1.



✗ 2.



✗ 3.



✓ 4.

Section : Part B General Knowledge and General Awareness

Q.1 Increase in MSP has forced farmers to divert land from production of coarse grains to production of \_\_\_\_\_.

Ans ✗ 1. barley and jowar

✓ 2. wheat and rice

✗ 3. maize

✗ 4. small millets

Q.2 In July 2021, the Indian Oil Corporation Limited announced that it would set up India's first 'Green Hydrogen' plant at its \_\_\_\_\_ refinery.

Ans ✓ 1. Mathura

✗ 2. Paradip

✗ 3. Panipat

✗ 4. Haldia

**Q.3** The excessive quantities of chemicals which get washed from the fields act as nutrients for \_\_\_\_\_ to flourish.

- Ans
- 1. algae
  - 2. fungi
  - 3. bacteria
  - 4. soil

**Q.4** What is least required for production of goods and services?

- Ans
- 1. Land and other natural resources
  - 2. People to do the work
  - 3. Tools, raw material and money
  - 4. Institutes to educate people

www.shikarat.com

**Q.5** The 'Dronacharya Award' is associated with \_\_\_\_\_.

- Ans
- 1. famous artisans
  - 2. outstanding coaches in sports and games
  - 3. exceptional warriors
  - 4. eminent doctors and surgeons

**Q.6** As a part of Nationally Determined Contributions as per the Paris Accord on Climate Change, India has made a pledge that by 2030, \_\_\_\_\_ of our installed power generation capacity shall be from non-fossil fuel sources.

- Ans
- 1. 40%
  - 2. 20%
  - 3. 30%
  - 4. 10%

**Q.7** 1932 d.l4 ♦ f [ `8\_4 kdT@[4, dl44 N4ö^6 (f\_\_\_\_\_L= b6Q %L kdT@[4 \4, 5πSkL b4] dl44 N4ö^6 \_='\_4 \_i\_ kd4♦ 5πLe4

- Ans
- 1. d7l ] g6 5π π
  - 2. Sh4lfg4g \_=IV
  - 3. grX f5h\_
  - 4. b6 f π=XL

Q.8 Who among the following won the Global Gandhi Peace Award in October 2020?

- Ans  1. Anita Devi  
 2. Santosh Sharma  
 3. Kanchan Sharma  
 4. Poonam Khangarot

Q.9 Article 72 of the Constitution of India deals with\_\_\_\_\_.

- Ans  1. conduct of business of the Government of India  
 2. qualification for membership of the Parliament  
 3. the constitution of the Parliament  
 4. the power of the President to grant pardons

Q.10 Many scholars argue that the Mesopotamian people of Tigris- Euphrates valley called Indus Valley Civilization\_\_\_\_\_.

- Ans  1. Magan  
 2. Meluhha  
 3. Sumerian  
 4. Babylon

Q.11 In which of the following places is the headquarters of Eastern Command of Indian Army located?

- Ans  1. Kolkata  
 2. Pune  
 3. Guwahati  
 4. Lucknow

Q.12 Which of the following organs is related with the anatomy of the human eye?

- Ans  1. Stigma  
 2. Patella  
 3. Iris  
 4. Spleen

www.shikarat.com

Q.13 The first amendment to the Constitution of India was made in the year\_\_\_\_\_.

- Ans
- 1. 1954
  - 2. 1950
  - 3. 1959
  - 4. 1951

Q.14

- Ans
- 1.
  - 2.
  - 3.
  - 4.

Q.15

- Ans
- 1.
  - 2.
  - 3.
  - 4.

Q.16 In November 2020, Prime Minister Narendra Modi unveiled a statue of\_\_\_\_\_ via video conferencing at the Jawaharlal Nehru University campus in Delhi.

- Ans
- 1. Swami Vivekananda
  - 2. Ramakrishna Paramahansa
  - 3. Bhagat Singh
  - 4. Mangal Pandey

Q.17 Which of the following statements about the Mahalwari system of revenue settlement is INCORRECT?

- Ans
- 1. The right to collect the revenue and pay it to the East India Company was given to the Zamindars.
  - 2. The system was devised by Holt Mackenzie.
  - 3. Land revenue under the system was revised from time to time.
  - 4. The system was introduced in 1822.

Q.18 In July 2020, which of the following ministries launched the 'Manodarpan' initiative under the Atmanirbhar Bharat Abhiyan?

- Ans
- 1. Ministry of Defence
  - 2. Ministry of Health and Family Welfare
  - 3. Ministry of Education
  - 4. Ministry of Tribal Affairs

Q.19 India won \_\_\_\_\_ bronze medals at the (2020) Olympic Games held in Tokyo in 2021.

- Ans
- 1. 5
  - 2. 4
  - 3. 7
  - 4. 3
- www.shikarat.com

Q.20 Bengal broke away from Mughal control under \_\_\_\_\_, who was deputy to the governor of the province.

- Ans
- 1. Shaista Khan
  - 2. Qasim Khan
  - 3. Farrukh Siyar
  - 4. Murshid Quli Khan

Q.21  $\frac{1}{2}$  of the population of India in 1951 was below the poverty line. Ans

- Ans
- 1. 1/2
  - 2. 5/6
  - 3. 1/4
  - 4. 7/8

Q.22 Who among the following won Chess.com's 2020 Junior Speed Online Chess Championship?

- Ans
- 1. Nihal Sarin
  - 2. Anton Smirnov
  - 3. Alexey Sarana
  - 4. Andrew Tang

**Q.23** GVA is the measure of the value of goods and services produced in an area, industry or sector of an economy. What is the full form of GVA?

- Ans
- 1. Growth Value Added
  - 2. Growth Value Asset
  - 3. Gross Value Added
  - 4. Gross Value Asset

**Q.24** A lent ₹6,000 to B for 2 years and ₹5,000 to C for 4 years. He received altogether ₹8,960 as simple interest from both. What is the interest rate?

- Ans
- 1. 8%
  - 2. 7.5%
  - 3. 7%
  - 4. 8.5%

**Q.25** With which sports do you associate the India international, KM Beenamol?

- Ans
- 1. Athletics
  - 2. Wrestling
  - 3. Table Tennis
  - 4. Badminton

Section : Part C Elementary Mathematics

**Q.1**

- Ans
- 1. 7%
  - 2. 7.5%
  - 3. 8%
  - 4. 8.5%

**Q.2** An article is marked 60% above its cost price. If a profit of 20% is made by selling the article, then what is the discount percentage offered on its marked price?

- Ans**
- ✓ 1. 25%
  - ✗ 2. 20%
  - ✗ 3. 40%
  - ✗ 4.  $12\frac{1}{2}\%$

**Q.3** Twenty-five men take 16 days to complete a certain work working 6 hours a day. How many men will be required to complete the work in 5 days working 8 hours a day?

- Ans**
- ✗ 1. 56
  - ✓ 2. 60
  - ✗ 3. 54
  - ✗ 4. 68

**Q.4** 36 litres of a mixture contains milk and water in the ratio 3 : 1. If 5 litres of this mixture is replaced by 5 litres of milk, then find the ratio of milk to water in the new mixture.

- Ans**
- ✗ 1. 3 : 7
  - ✗ 2. 3 : 5
  - ✓ 3. 8 : 1
  - ✗ 4. 5 : 2

**Q.5** A shopkeeper marks his goods 20% above the cost price. He sells one-fourth of the goods at the marked price and the remaining at 30% discount on the marked price. What is his gain/loss percentage?

- Ans**
- ✗ 1. Gain 7%
  - ✗ 2. Gain 11%
  - ✓ 3. Loss 7%
  - ✗ 4. Loss 11%

**Q.6** The marked price of an article is ₹900. If a shopkeeper sold the article at 20% loss after giving 36% discount, then the cost price of the article is:

- Ans
1. ₹620
  2. ₹740
  3. ₹720
  4. ₹760

**Q.7** Find the LCM of  $\frac{2}{3}$ ,  $\frac{4}{7}$  and  $\frac{9}{13}$ .

- Ans
1. 28
  2. 12
  3. 36
  4. 15

www.shikarat.com

**Q.8** Simplify  $\left[ 3\frac{1}{4} \div \left\{ 1\frac{1}{4} - \frac{1}{2} \left( 2\frac{1}{2} - \frac{1}{4} - \frac{1}{6} \right) \right\} \right] \div \left( \frac{1}{5} \text{ of } 4\frac{1}{3} \right) - 2 \times 3 \div 6 \text{ of } \frac{1}{3}$ .

- Ans
1. 90
  2. 87
  3. 84
  4. 36

**Q.9** If 30% of  $(x - y) = 20\%$  of  $(x + y)$ , then what per cent of  $x$  is  $y$ ?

- Ans
1. 24%
  2. 20%
  3. 15%
  4. 35%



**Q.10** If the perimeter of a rectangle is 50 cm and its diagonal is 23 cm long, then what is the area of the rectangle?

- Ans**
1. 48 cm<sup>2</sup>
  2. 36 cm<sup>2</sup>
  3. 50 cm<sup>2</sup>
  4. 40 cm<sup>2</sup>

**Q.11** What is the volume of a right circular cylinder whose area of the base is 40 cm<sup>2</sup> and the height is 7 cm?

- Ans**
- ✗ 1. 140 cm<sup>3</sup>
  - ✗ 2. 240 cm<sup>3</sup>
  - ✓ 3. 280 cm<sup>3</sup>
  - ✗ 4. 160 cm<sup>3</sup>

**Q.12** The simple interest on a certain sum of money for 2 years at 15% per annum is half of the compound interest on ₹5,000 for 2 years at 10% per annum. What is the sum placed on simple interest?

- Ans**
1. ₹2,250
  2. ₹2,000
  3. ₹1,750
  4. ₹1,050

**Q.13** A boat takes 2 hours to cover a certain distance downstream, but it takes  $3\frac{1}{4}$  hours to cover the same distance upstream. If the speed of the stream is 5 km/h, then what is the speed (in km/h) of the boat in still water?

- Ans**
- ✓ 1. 21
  - ✗ 2. 24
  - ✗ 3. 18
  - ✗ 4. 20

**Q.14** In a class of 80 students, 40% are girls and the rest are boys. The average weight of the boys is 55.5 kg. If the average weight of all the students in the class is 54 kg, then the average weight (in kg) of the girls is:

Ans  1. 51.75

2. 52

3. 50.25

4. 51

www.shikarat.com

**Q.15** The income of A is 40% more than the income of B, and the income of C is 30% less than the total incomes of A and B. The income of A is what per cent less than the income of C?

Ans  1. 25%

2. 16%

3.  $16\frac{2}{3}\%$

4. 20%

**Q.16** A vegetable vendor buys vegetables from a wholesale market for ₹4,500. If the overhead expenses are 4% of the cost price, then at what price should he sell the vegetables to earn 15%?

Ans 1. ₹4,995

2. ₹5,175

3. ₹5,382

4. ₹5,355

**Q.17** A train X travelling at a speed of 58 km/h takes 16 seconds to completely cross another train Y travelling at a speed of 50 km/h in the opposite direction. The length of train Y is three times the length of train X. Train Y passes a bridge in 54 seconds. The length (in m) of the bridge is:

Ans  1. 360

2. 390

3. 750

4. 480

Q.18 Simplify the following expression.

$$5 \div \frac{5}{6} \times 6 - 1 \div \frac{1}{2} \times 2$$

Ans  1. 30

2. 36

3. 0

4. 32

Q.19 A retailer buys a tricycle for ₹1,125. His overhead expenses are ₹75. If he sells the tricycle for ₹1,380, then what is his profit percentage?

Ans  1. 18%

2. 12.5%

3. 15%

4. 12%

Q.20 At what rate per cent per annum will a sum of money double in 12 years?

Ans  1. 7%

2.  $8\frac{1}{3}\%$

3.  $8\frac{2}{3}\%$

4.  $7\frac{1}{3}\%$

Q.21 A can complete a certain task in 18 days, B in 27 days and C in 36 days. A, B and C began to work together, but A left 4 days before and B left 6 days before the completion of the task. For how many days did B work?

Ans  1. 12 [www.shikarat.com](http://www.shikarat.com)

2. 6

3. 8

4. 10

**Q.22** The LCM of two numbers is 12 times their HCF. If one of the numbers is 15 and the sum of the HCF and LCM is 65, then find the other number.

Ans  1. 25

2. 20

3. 30

4. 42

**Q.23** If 45% of a number is equal to two-third of another number, what is the ratio of the first number to the second number?

Ans  1. 9 : 10

2. 40 : 27

3. 40 : 9

4. 30 : 27

**Q.24** In a class of 45 students, the average age of the class is 18 years. The average age of 35 students is 15. What is the average age of the remaining 10 students?

Ans  1. 28.5

2. 25.2

3. 21.70

4. 23.25

**Q.25** If  $(x + y) : (x - y) = 23 : 3$ , what is the value of  $\frac{x^2 - y^2}{x^2 + y^2}$  ?

Ans  1.  $\frac{269}{69}$

2.  $\frac{69}{269}$

3.  $\frac{165}{269}$

4.  $\frac{269}{165}$

**Q.1 Select the INCORRECTLY spelt word.**

Ans  1. Misanthorpe

2. Alumni

3. Mascot

4. Socialite

**Q.2 The following sentence has been split into four segments. Identify the segment that contains a grammatical error.**

Iron is / most useful / than any / other metal.

Ans  1. most useful

2. Iron is

3. than any

4. other metal

**Q.3 Select the most appropriate SYNONYM of the given word.**

Seize

Ans  1. Catch

2. Offer

3. Shut

4. Lose

**Q.4 Select the option that can be used as a one-word substitute for the given group of words.**

Song which is sung in a church by a group of singers

Ans  1. Lullaby

2. Anthem

3. Carol

4. Dirge

**Q.5** Select the option that can be used as a one-word substitute for the given group of words.

Twice a month

Ans  1. Bimonthly

2. Monthly

3. Biennial

4. Half-yearly

www.shikarat.com

**Q.6** Select the most appropriate ANTONYM of the given word.

Vaguely

Ans  1. Distinctly

2. Marginally

3. Distractedly

4. Uncertainly

**Q.7** Select the INCORRECTLY spelt word.

Ans  1. Transleate

2. Transcend

3. Transmit

4. Transpire

**Q.8** Select the most appropriate option to fill in the blank.

Because of the loss of \_\_\_\_\_ and lack of food, animals are forced to enter villages.

Ans  1. ecosystem

2. culture

3. habitats

4. grasslands

**Q.9 Select the most appropriate synonym of the given word.**

**Worth**

- Ans  1. Vigour  
 2. Roughness  
 3. Value  
 4. Power

**Q.10 Select the option that can be used as a one-word substitute for the given group of words.**

**A period of ten years**

- Ans  1. Fortnight  
 2. Decade  
 3. Millennium  
 4. Centenary

**Q.11 Fill in the blank with the most appropriate word.**

Pallavi gave a \_\_\_\_\_ smile when she saw her daughter on the stage.

- Ans  1. broad  
 2. strong  
 3. deep  
 4. thick

**Q.12 Select the most appropriate meaning of the given idiom.**

**Pain in the neck**

- Ans  1. Someone or something that is annoying or a nuisance  
 2. Some who is forever ill  
 3. Someone who is always angry  
 4. Someone who is always depressed

**Q.13** The following sentence has been split into four segments. Identify the segment that contains a grammatical error.

Research in the medical field / claims that German measles / usually cause milder / infection than Martian measles.

- Ans
- 1. claims that German measles
  - 2. Research in the medical field
  - 3. infection than Martian measles
  - 4. usually cause milder

www.shikarat.com

**Q.14** Select the option that will improve the underlined part of the given sentence. In case no improvement is needed, select 'No improvement required'.

Hopefully, I will have got my driving license by the end of this year.

- Ans
- 1. had got
  - 2. No improvement required
  - 3. will have get
  - 4. would got

**Q.15** Select the option that will improve the underlined part of the given sentence. In case no improvement is needed, select 'No improvement required'.

Children played cheerfully in the park all day.

- Ans
- 1. cheerfully on
  - 2. cheerful at
  - 3. No improvement required
  - 4. cheerfully between

**Q.16** Select the most appropriate ANTONYM of the given word.

Connect

- Ans
- 1. Affirm
  - 2. Link
  - 3. Demur
  - 4. Detach



Q.17 Select the most appropriate option to fill in the blank.

The Elizabethan society was extremely \_\_\_\_\_ and therefore, believed in the existence of ghosts and witches.

- Ans  1. superstitious  
 2. enthralling  
 3. lovable  
 4. industrious

Q.18 Select the most appropriate option that can substitute the underlined segment in the given sentence. If there is no need to substitute it, select 'No substitution required'.

Does the manufacturer have a website where details of the product are available?

- Ans  1. for the product be available  
 2. on the product was available  
 3. No substitution required  
 4. of the product is available

Q.19 The following sentence has been split into four segments. Identify the segment that contains a grammatical error.

People vary greatly / on the way / they appear and / in their personality traits.

- Ans  1. in their personality traits  
 2. they appear and  
 3. People vary greatly  
 4. on the way

Q.20 Select the most appropriate meaning of the given idiom.

Loaded words

- Ans  1. Words that have been used by well-known writers  
 2. Words that common people cannot understand  
 3. Words that carry more significance than their literal meaning  
 4. Words or language that is impolite and rude

**Comprehension:**

In the following passage, some words have been deleted. Read the passage carefully and select the most appropriate option to fill in each blank.

The Great Indian, or Thar, Desert forms an important southern extension of the Indo-Gangetic Plain. (1)\_\_\_ is mostly in north-western India but (2)\_\_\_ extends into eastern Pakistan and is (3)\_\_\_ an area of gently undulating terrain . Further, (4)\_\_\_ it are several areas dominated (5)\_\_\_ shifting sand dunes and numerous isolated hills.

**SubQuestion No : 21**

**Q.21 Select the most appropriate option to fill in blank no. 1.**

- Ans  1. Where  
 2. That  
 3. There  
 4. It

**Comprehension:**

In the following passage, some words have been deleted. Read the passage carefully and select the most appropriate option to fill in each blank.

The Great Indian, or Thar, Desert forms an important southern extension of the Indo-Gangetic Plain. (1)\_\_\_ is mostly in north-western India but (2)\_\_\_ extends into eastern Pakistan and is (3)\_\_\_ an area of gently undulating terrain . Further, (4)\_\_\_ it are several areas dominated (5)\_\_\_ shifting sand dunes and numerous isolated hills.

**SubQuestion No : 22**

**Q.22 Select the most appropriate option to fill in blank no. 2.**

- Ans  1. sometimes  
 2. plus  
 3. also  
 4. moreover

**Comprehension:**

In the following passage, some words have been deleted. Read the passage carefully and select the most appropriate option to fill in each blank.

The Great Indian, or Thar, Desert forms an important southern extension of the Indo-Gangetic Plain. (1)\_\_\_ is mostly in north-western India but (2)\_\_\_ extends into eastern Pakistan and is (3)\_\_\_ an area of gently undulating terrain . Further, (4)\_\_\_ it are several areas dominated (5)\_\_\_ shifting sand dunes and numerous isolated hills.

**SubQuestion No : 23**

**Q.23 Select the most appropriate option to fill in blank no. 3.**

- Ans  1. mostly  
 2. nearly  
 3. closely  
 4. quite

**Comprehension:**

In the following passage, some words have been deleted. Read the passage carefully and select the most appropriate option to fill in each blank.

The Great Indian, or Thar, Desert forms an important southern extension of the Indo-Gangetic Plain. (1)\_\_\_ is mostly in north-western India but (2)\_\_\_ extends into eastern Pakistan and is (3)\_\_\_ an area of gently undulating terrain. Further, (4)\_\_\_ it are several areas dominated (5)\_\_\_ shifting sand dunes and numerous isolated hills.

**SubQuestion No : 24**

**Q.24 Select the most appropriate option to fill in blank no. 4.**

Ans  1. above

2. within

3. over [www.shikarat.com](http://www.shikarat.com)

4. interior

**Comprehension:**

In the following passage, some words have been deleted. Read the passage carefully and select the most appropriate option to fill in each blank.

The Great Indian, or Thar, Desert forms an important southern extension of the Indo-Gangetic Plain. (1)\_\_\_ is mostly in north-western India but (2)\_\_\_ extends into eastern Pakistan and is (3)\_\_\_ an area of gently undulating terrain. Further, (4)\_\_\_ it are several areas dominated (5)\_\_\_ shifting sand dunes and numerous isolated hills.

**SubQuestion No : 25**

**Q.25 Select the most appropriate option to fill in blank no. 5.**

Ans  1. through

2. via

3. by

4. beside

Section : Part D Hindi

Q.1 [Blank] h4 d.f [Blank] - [Blank]4\_cf\_ = L= 5πg kbk= `e7 [Blank] i [Blank] L4 Qe\_ Lf ≥

Q4V `f d [Blank] e4ö \_\_\_\_\_ fl6 \6 ≥ π

Ans  1. k\_k\_4

2. 5πc3\_c\_

3. a|a|4

4. QIQI4

Q.2 आकाश में बादल छाये हुए हैं।

कौन-सा शब्द रेखांकित शब्द का पर्याय नहीं है?

- Ans
- 1. पयोधर
  - 2. जलधर
  - 3. वाग्देवी
  - 4. मेघ

Q.3 दिए गए वाक्यों का वह भाग तय करें जिसमें कोई त्रुटि है। यदि कोई त्रुटि नहीं है, तो 'कोई त्रुटि नहीं है' चुनें।

एक नागरिक को (1)/ अपना कर्तव्य (2)/ निबाहना चाहिए।(3)/ कोई त्रुटि नहीं है(4)

- Ans
- 1. 2
  - 2. 3
  - 3. 1
  - 4. 4

Q.4 दिए गये शब्दों का निम्न शब्दों में से विलोम नहीं है-

सुख तथा

- Ans
- 1. अव्यवस्था
  - 2. सुचारु
  - 3. गड़बड़ी
  - 4. कुव्यवस्था

Q.5 'जो इंद्रियों की पहुँच से बाहर हो' वाक्य शब्दों के लिए एक शब्द होगा-

- Ans
- 1. इंद्रियजित
  - 2. इंद्रियातीत
  - 3. ऐंद्रिक
  - 4. इंद्रियनिग्रह

Q.6 कम बोलने वाले शब्दों को क्या कहते हैं?

- Ans
- 1. अल्पभाषी
  - 2. वाचाल
  - 3. गूंगा
  - 4. गायक

Q.7 सही वर्तनी वाले शब्द का चयन करें।

Ans  1. पेटुक

2. पैतुक

www.shikarat.com

3. पैत्रिक

4. पितुक

Q.8 दिये गये वाक्य के लिए एक शब्द दीजिए।

परम्परा से चली आ रही बात या कथा

Ans  1. अविचारित

2. अनुभूत

3. अनुश्रुति

4. पारम्परिक

Q.9 दिये गये वाक्य के किस भाग में त्रुटि है?

यह मानसिक दासता सदा काल से चली आ रही है।

Ans  1. चली आ

2. यह मानसिक दासता

3. सदा काल से

4. रही है।

Q.10 सही वर्तनी वाले शब्द का चयन करें।

Ans  1. संयास

2. संन्यास

3. सनयास

4. सन्यास

Q.11 माँ रसोईघर में बच्चों के लिए खाने कु पका रहि है।

अशुद्ध अंश को पहचानिए।

Ans  1. माँ

2. रसोई घर मे

3. खाने कु पका रहि है।

4. बच्चों के लिए

Q.12 दिये गये वाक्यों में रेखांकित अंश को प्रतिस्थापित करने के लिए सबसे उपयुक्त विकल्प का चयन करें।

मैं और मेरे मित्रों को हाकी खेलने का शौक है।

- Ans
- 1. मैंने
  - 2. मैंने को
  - 3. मेरे को
  - 4. मुझे

Q.13 'चंचल' का विलोम शब्द होगा-

- Ans
- 1. स्तब्ध
  - 2. अचेत
  - 3. स्थिर
  - 4. अस्थिर

Q.14 दिए गए वाक्यों में रेखांकित खंड को प्रतिस्थापित करने के लिए सबसे उपयुक्त विकल्प का चयन करें।  
यदि इसे प्रतिस्थापित करने की आवश्यकता नहीं है, तो विकल्प 'किसी बदलाव की आवश्यकता नहीं है' का चयन करें।

आजकल राजनीति बदल गया है।

- Ans
- 1. किसी बदलाव की आवश्यकता नहीं है।
  - 2. बदल गई है
  - 3. बदल गए हैं [www.shikarat.com](http://www.shikarat.com)
  - 4. बदल गई हैं

Q.15 रक्तदान को भरने के लिए सबसे उपयुक्त शब्द का चयन करें।

दहेजप्रथा समाज के लिए \_\_\_\_\_ है।

- Ans
- 1. अपराध
  - 2. सम्मान
  - 3. अपमान
  - 4. अभिशाप

Q.16 'अंधेरी रातों वाला पखवारा' वाक्य के लिए उपयुक्त शब्द होगा-

- Ans
- 1. अमावस्या
  - 2. कृष्णपक्ष
  - 3. शुक्लपक्ष
  - 4. मलमास

Q.17 निम्न चार विकल्पों में से, उस विकल्प का चयन करें जो दिए गये मुहावरे का अर्थ व्यक्त करता है।

'मोहर लगा देना'

- Ans
- 1. दामा लगाना
  - 2. लड़ाई जीत लेना
  - 3. पुष्टि करना
  - 4. निश्चित होना

Q.18 दिए गए शब्दों के समानार्थक शब्दों का चयन कीजिए।

सूर्य

- Ans
- 1. मयंक
  - 2. हिमांशु
  - 3. आदित्य
  - 4. शशधर

Q.19 'आँखें दिखाना' मुहावरे का अर्थ बताइए।

- Ans
- 1. रूखापन
  - 2. बहुत गौर से देखना
  - 3. शर्म करना
  - 4. आँखों में रोग होना

Q.20 नीचे दिए गए वाक्यों में रिक्त स्थान भरने के लिए सबसे उपयुक्त शब्दों का चयन करें।

शर्मिला का ऊंची एड़ी का सैडिल \_\_\_\_\_ किए जा रहा था।

- Ans
- 1. गटर-गटर
  - 2. खटर-पटर
  - 3. खिटिर-खिटिर
  - 4. पटर-पटर

**Comprehension:**

दिमाग मनुष्य के लिए सुख के साधन बटोर सकता है, मगर संतोष और (1)\_\_\_\_\_ मनुष्य के हृदय से उत्पन्न होती है। लेकिन मनुष्यता के लिए यह घोर (2)\_\_\_\_\_ की बात है कि आज आदमी के पास दिल नाम की चीज नहीं रह गयी। उसकी सारी (3)\_\_\_\_\_ उसका दिमाग हो गया है। दिमाग से तलवार तो वह बहुत (4)\_\_\_\_\_ निकाल रहा है, लेकिन दिल की गैरहाजिरी में वह यह (5)\_\_\_\_\_ ही नहीं पा रहा है कि यह तलवार कहां गिरायी जानी चाहिए। परिणामतः वह इस तलवार से अपना ही गला काट रहा है।

निम्न प्रश्नों के उत्तर उपरोक्त गद्यांश के आधार पर दीजिए।

**SubQuestion No : 21**

Q.21 गाँश के र □ ाथान (1) के लिए सर्वाधिक उपयु □ श □ होगा-

- Ans  1. शांति  
 2. मुक्ति  
 3. प्रगति  
 4. शक्ति

**Comprehension:**

दिमाग मनुष्य के लिए सुख के साधन बटोर सकता है, मगर संतोष और (1)\_\_\_\_\_ मनुष्य के हृदय से उत्पन्न होती है। लेकिन मनुष्यता के लिए यह घोर (2)\_\_\_\_\_ की बात है कि आज आदमी के पास दिल नाम की चीज नहीं रह गयी। उसकी सारी (3)\_\_\_\_\_ उसका दिमाग हो गया है। दिमाग से तलवार तो वह बहुत (4)\_\_\_\_\_ निकाल रहा है, लेकिन दिल की गैरहाजिरी में वह यह (5)\_\_\_\_\_ ही नहीं पा रहा है कि यह तलवार कहां गिरायी जानी चाहिए। परिणामतः वह इस तलवार से अपना ही गला काट रहा है।

निम्न प्रश्नों के उत्तर उपरोक्त गद्यांश के आधार पर दीजिए।

**SubQuestion No : 22**

Q.22 गाँश के र □ ाथान (2) के लिए सर्वाधिक उपयु □ श □ होगा-

- Ans  1. अपमान  
 2. संकट  
 3. भय  
 4. हर्ष

**Comprehension:**

दिमाग मनुष्य के लिए सुख के साधन बटोर सकता है, मगर संतोष और (1)\_\_\_\_\_ मनुष्य के हृदय से उत्पन्न होती है। लेकिन मनुष्यता के लिए यह घोर (2)\_\_\_\_\_ की बात है कि आज आदमी के पास दिल नाम की चीज नहीं रह गयी। उसकी सारी (3)\_\_\_\_\_ उसका दिमाग हो गया है। दिमाग से तलवार तो वह बहुत (4)\_\_\_\_\_ निकाल रहा है, लेकिन दिल की गैरहाजिरी में वह यह (5)\_\_\_\_\_ ही नहीं पा रहा है कि यह तलवार कहां गिरायी जानी चाहिए। परिणामतः वह इस तलवार से अपना ही गला काट रहा है।

निम्न प्रश्नों के उत्तर उपरोक्त गद्यांश के आधार पर दीजिए।

**SubQuestion No : 23**

Q.23 गाँश के र □ ाथान (3) के लिए सर्वाधिक उपयु □ श □ होगा-

- Ans  1. सफलता  
 2. पूंजी  
 3. इज्जत  
 4. मेहनत



**Comprehension:**

दिमाग मनुष्य के लिए सुख के साधन बटोर सकता है, मगर संतोष और (1)\_\_\_\_\_ मनुष्य के हृदय से उत्पन्न होती है। लेकिन मनुष्यता के लिए यह घोर (2)\_\_\_\_\_ की बात है कि आज आदमी के पास दिल नाम की चीज नहीं रह गयी। उसकी सारी (3)\_\_\_\_\_ उसका दिमाग हो गया है। दिमाग से तलवार तो वह बहुत (4)\_\_\_\_\_ निकाल रहा है, लेकिन दिल की गैरहाजिरी में वह यह (5)\_\_\_\_\_ ही नहीं पा रहा है कि यह तलवार कहां गिरायी जानी चाहिए। परिणामतः वह इस तलवार से अपना ही गला काट रहा है।

निम्न प्रश्नों के उत्तर उपरोक्त गद्यांश के आधार पर दीजिए।

**SubQuestion No : 24**

Q.24 गाँव के रक्तान (4) के लिए सर्वाधिक उपयुक्त शब्द होगा-

- Ans
- 1. नुकीली
  - 2. सुंदर
  - 3. चटक
  - 4. तीखी

**Comprehension:**

दिमाग मनुष्य के लिए सुख के साधन बटोर सकता है, मगर संतोष और (1)\_\_\_\_\_ मनुष्य के हृदय से उत्पन्न होती है। लेकिन मनुष्यता के लिए यह घोर (2)\_\_\_\_\_ की बात है कि आज आदमी के पास दिल नाम की चीज नहीं रह गयी। उसकी सारी (3)\_\_\_\_\_ उसका दिमाग हो गया है। दिमाग से तलवार तो वह बहुत (4)\_\_\_\_\_ निकाल रहा है, लेकिन दिल की गैरहाजिरी में वह यह (5)\_\_\_\_\_ ही नहीं पा रहा है कि यह तलवार कहां गिरायी जानी चाहिए। परिणामतः वह इस तलवार से अपना ही गला काट रहा है।

निम्न प्रश्नों के उत्तर उपरोक्त गद्यांश के आधार पर दीजिए।

**SubQuestion No : 25**

Q.25 गाँव के रक्तान (5) के लिए सर्वाधिक उपयुक्त शब्द होगा-

- Ans
- 1. देख
  - 2. समझ
  - 3. मान
  - 4. सुन