


Constable GD in CAPFs SSF Rifleman GD in Assam Rifles and Sepoy in NCB Examination 2022

Roll Number	
Candidate Name	
Venue Name	iON Digital Zone iDZ Akshay Colony
Exam Date	10/01/2023
Exam Time	5:15 PM - 6:15 PM
Subject	Constable GD Examination 2022

Section : Part-A-General Intelligence and Reasoning

Q.1 Select the correct mirror image of the given figure when the mirror is placed at MN as shown below.

PsyCHoLoGy



Ans

✗ 1. PꝲYꝲHꝲLꝲGꝲ

✗ 2. ꝲꝲYꝲHꝲLꝲGꝲ

✗ 3. ꝲꝲYꝲHꝲLꝲGꝲ

✓ 4. ꝲꝲYꝲHꝲLꝲGꝲ

www.shikarat.com

Question ID : 26433085562

Status : Answered

Chosen Option : 4

Q.2 Which of the following terms will replace the question mark (?) in the given series?
MQEV, ?, QOIT, SNKS, UMMR

Ans ✗ 1. OPHU

✓ 2. OPGU

✗ 3. PPHV

✗ 4. NPGU

Question ID : 26433068308

Status : Answered

Chosen Option : 2

Q.3 Select the option that is related to the third word in the same way as the second word is related to the first word. (The words must be considered as meaningful English words and must not be related to each other based on the number of letters/number of consonants/vowels in the word.)

Meghalaya : Shillong :: Kerala : ?

Ans 1. Thiruvananthapuram

2. Bengaluru

3. Chennai

4. Panaji

Question ID : 26433067371

Status : Answered

Chosen Option : 1

Q.4 Which option represents the correct order of the given words as they would appear in the English dictionary?

1 inside

2 inertia

3 instruction

4 insight

5 individual

Ans 1. 5,3,1,2,4

2. 5,2,1,4,3

3. 5,1,2,3,4

4. 5,1,3,4,2

Question ID : 26433069299

Status : Answered

Chosen Option : 2

Q.5 Three statements are given followed by three conclusions. Assuming the statements to be true, even if they seem to be at variance with commonly known facts, decide which of the conclusions logically follow(s) from the statements.

Statements:

Some computers are phones.

All phones are calculators.

All calculators are i-pads.

Conclusions:

1. Some i-pads are computers.

2. All calculators are phones.

3. Some i-pads are phones.

Ans 1. All conclusions follow.

2. Only conclusions 2 and 3 follow.

3. Only conclusions 1 and 2 follow.

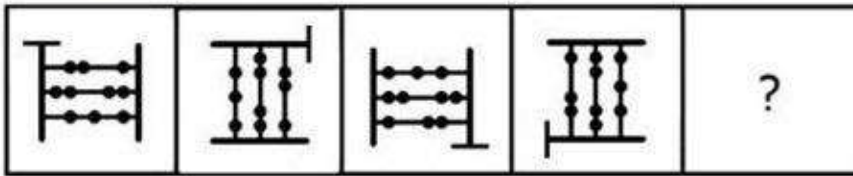
4. Only conclusions 1 and 3 follow.

Question ID : 26433089424

Status : Answered

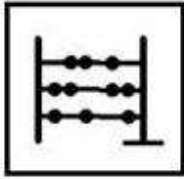
Chosen Option : 4

Q.6 Select the figure that will come next in the following series.

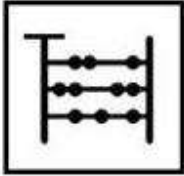


Ans

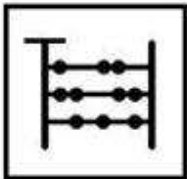
✗ 1.



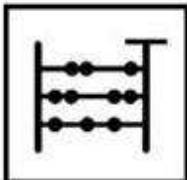
✓ 2.



✗ 3.



✗ 4.



www.shikarat.com

Question ID : 26433078968

Status : Answered

Chosen Option : 2

Q.7 Which of the following numbers will replace the question mark (?) in the given series?
115, 102, 107, 94, 99, ?

Ans ✗ 1. 92

✗ 2. 84

✓ 3. 86

✗ 4. 96

Question ID : 26433076749

Status : Not Answered

Chosen Option : --

Q.8 In a certain code language, 'STATION' is written as 'UVYVGMP' and 'TRIUMPH' is written as 'VTGSORJ'. How will 'HOLIDAY' be written in that language?

Ans ✓ 1. JMNGFYA

✗ 2. JMNGBXW

✗ 3. JMNGFCW

✗ 4. JMNGFXW

Question ID : 26433081759

Status : Not Answered

Chosen Option : --

Q.9 Which two signs should be interchanged to make the below equation mathematically correct?

$$48 - 96 \times 4 \div 3 + 58 = 34$$

- Ans
- 1. \times and $+$
 - 2. $-$ and \div
 - 3. $+$ and \times
 - 4. $+$ and $-$

Question ID : 264330117499

Status : Not Answered

Chosen Option : --

Q.10 A @ B means 'A is the sister of B'.
A & B means 'A is the brother of B'.
A # B means 'A is the wife of B'.
A ^ B means 'A is the mother of B'.
A + B means 'A is the father of B'.
If $X + T \wedge M \# G \& C \wedge K @ H \wedge Q$, then which of the following statements is NOT correct?

- Ans
- 1. X is the maternal grandfather of M.
 - 2. G is the father of K.
 - 3. C is the mother of H.
 - 4. G is the son-in-law of T.

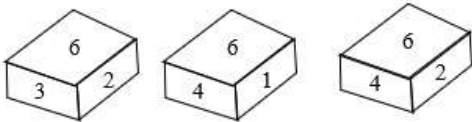
Question ID : 26433068952

Status : Not Answered

Chosen Option : --

Q.11 Three different positions of the same dice are shown. Find the number on the face opposite the face showing '6'.

www.shikarat.com



- Ans
- 1. 5
 - 2. 1
 - 3. 4
 - 4. 3

Question ID : 26433090066

Status : Answered

Chosen Option : 1

Q.12 Select the option that is related to the fifth number in the same way as the second number is related to the first number and the fourth number is related to the third number.

$$48 : 5 :: 30 : 3 :: 57 : ?$$

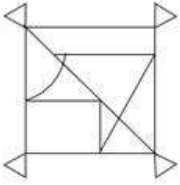
- Ans
- 1. 6
 - 2. 2
 - 3. 7
 - 4. 4

Question ID : 26433069418

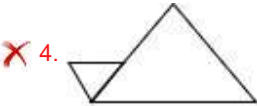
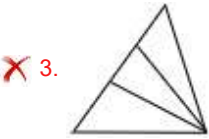
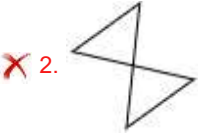
Status : Not Answered

Chosen Option : --

Q.13 Select the option figure which is embedded in the given figure. (Rotation is NOT allowed)



Ans



Question ID : 26433069343

Status : Answered

Chosen Option : 1

Q.14 In a certain code language, 'TABLE' is written as '£@6#%', 'LARK' is written as '#@28' and 'BUCKET' is written as '6\$+8%£'. How will 'CLARET' be written in that language?

Ans ✓ 1. +#@2%£

✗ 2. +#26%\$

✗ 3. 8#2%6+

✗ 4. 8#@6%£

Question ID : 26433069608

Status : Not Answered

Chosen Option : --

Q.15 Select the option that is related to the fifth letter-cluster in the same way as the second letter-cluster is related to the first letter-cluster and the fourth letter-cluster is related to the third letter-cluster.

PENALTY : QFOBMUZ :: OFFENSE : PGGFOTF :: NERVOUS : ?

Ans ✗ 1. VOUSNER

✗ 2. SUOVREN

✓ 3. OFSWPVT

✗ 4. RENVOUS

Question ID : 26433069637

Status : Answered

Chosen Option : 3

Q.16 Which two signs should be interchanged to make the given equation correct?
 $561 \div 11 \times 22 + 6 - 25 = 158$

- Ans
- 1. + and -
 - 2. ÷ and +
 - 3. + and ×
 - 4. ÷ and ×

Question ID : 26433082742
Status : Not Answered
Chosen Option : --

Q.17 There are 7 people sitting around a circular table facing towards the centre - A, B, C, D, E, F, and G. A is sitting to the immediate right of C and immediate left of D. G is sitting to the immediate left of C and immediate right of F. E is sitting to the immediate left of F and immediate right of B. B is sitting second right of A. Who is the immediate neighbour of A and B?

- Ans
- 1. G
 - 2. D
 - 3. F
 - 4. E

Question ID : 26433074607
Status : Not Attempted and Marked For Review
Chosen Option : --

Q.18 Which letter-cluster will replace the question mark (?) to complete the given series?
CTUJ, EVWL, ?, IZAP, KBCR

- Ans
- 1. FXYN
 - 2. FXYO
 - 3. GXYO
 - 4. GXYN

www.shikarat.com

Question ID : 26433067940
Status : Not Answered
Chosen Option : --

Q.19 Seven people A, B, C, D, E, F, and G are sitting in a straight row facing the North. A is sitting in the centre of the row. G and E are sitting at the ends of the row. B is sitting to the immediate left of A. F is sitting to the immediate right of G. D is sitting to the immediate left of E. C is sitting to the second left of E. Who is sitting between G and B?

- Ans
- 1. C
 - 2. F
 - 3. A
 - 4. D

Question ID : 26433074622
Status : Not Answered
Chosen Option : --

Q.20 Which of the following numbers will replace the question mark (?) in the given series?
23, 27, 35, ?, 63, 83, 107

- Ans
- 1. 55
 - 2. 43
 - 3. 39
 - 4. 47

Question ID : 26433068090
Status : Not Answered
Chosen Option : --

Section : Part-B-General Knowledge and General awareness

Q.1 In India, in which year was the National Food for Work Programme scheme launched?

- Ans
- 1. 2004
 - 2. 2003
 - 3. 2000
 - 4. 2005

Question ID : 264330116078
Status : Answered
Chosen Option : 2

Q.2 Mohiniyattam is a solo classical dance form related to which of the following states?

- Ans
- 1. Uttar Pradesh
 - 2. Karnataka
 - 3. Kerala
 - 4. Bihar

www.shikarat.com

Question ID : 26433071658
Status : Answered
Chosen Option : 3

Q.3 The Supreme Court of India passed a judgment in _____ in which it declared the practice of Triple Talaq as unconstitutional and the practice of the same be void.

- Ans
- 1. 2013
 - 2. 2017
 - 3. 2018
 - 4. 2014

Question ID : 264330116224
Status : Answered
Chosen Option : 3

Q.4 Which of the following was the main demand of the peasant movement of Kheda?

- Ans
- 1. Plantation system to be dropped
 - 2. Revenue collection be relaxed
 - 3. Free irrigation facility to be provided
 - 4. Hybrid seeds to be provided

Question ID : 26433089883
Status : Answered
Chosen Option : 1

Q.5 Makar Sankranti is celebrated as Pedda Panduga in which of the following states?

- Ans
- 1. Kerala
 - 2. Karnataka
 - 3. Andhra Pradesh
 - 4. Tamil Nadu

Question ID : 264330115106
Status : Answered
Chosen Option : 1

Q.6 Pick the odd one out (Hint: fiber crops)

- Ans
- 1. rubber
 - 2. jute
 - 3. hemp
 - 4. cotton

Question ID : 264330115533
Status : Answered
Chosen Option : 3

Q.7 Which Union Minister of Government of India inaugurated the Tech Conclave 2022 in March?

- Ans
- 1. Ashwini Vaishnaw
 - 2. Amit Shah
 - 3. Rajnath Singh
 - 4. Smriti Irani

www.shikarat.com

Question ID : 264330114930
Status : Answered
Chosen Option : 1

Q.8 In India, during October-November, with the apparent movement of the sun towards the south, the _____ over the northern plains becomes weaker.

- Ans
- 1. Monsoon trough
 - 2. Inverted trough
 - 3. Lee trough
 - 4. Upper level trough

Question ID : 264330115988
Status : Answered
Chosen Option : 4

Q.9 H_2SO_4 is the chemical formula for _____.

- Ans
- 1. Blue Vitriol
 - 2. Muriatic Acid
 - 3. Oil of Vitriol
 - 4. Green Vitriol

Question ID : 264330115165
Status : Answered
Chosen Option : 4

Q.10 'Mother of Mohiniyattam' is a docu-fiction based on _____.

- Ans
- 1. Shovana Narayan
 - 2. Anuradha Pandey
 - 3. Kalamandalam Kallyanikutty Amma
 - 4. Mahaboob Subhani

Question ID : 264330115878
Status : Answered
Chosen Option : 3

Q.11 Budget documents classify total expenditure into _____.

- Ans
- 1. plan and non-plan expenditure
 - 2. goods and incomes
 - 3. part and whole expenditure
 - 4. services and non- goods services

Question ID : 264330115286
Status : Answered
Chosen Option : 4

Q.12 Which of the following player was the highest scorer in the final match of cricket world cup 1983?

- Ans
- 1. Kapil Dev
 - 2. Sunil Gavaskar
 - 3. Mohinder Amarnath
 - 4. Krishnamachari Srikkanth

www.shikarat.com

Question ID : 264330116295
Status : Answered
Chosen Option : 1

Q.13 Techniques of making silk were first invented in China around _____ years ago.

- Ans
- 1. 20000
 - 2. 15000
 - 3. 7000
 - 4. 30000

Question ID : 26433090573
Status : Answered
Chosen Option : 3

Q.14 Which of the following Articles of the Constitution of India deals with the state executive?

- Ans
- 1. Articles 153-167
 - 2. Articles 145-150
 - 3. Articles 134-143
 - 4. Articles 123-132

Question ID : 26433086852
Status : Answered
Chosen Option : 2

Q.15 Which country hosted the Asian Athletics Championship in 2019?

- Ans 1. Qatar
 2. Philippines
 3. Jordan
 4. South Korea

Question ID : 264330115925
Status : Answered
Chosen Option : 3

Q.16 Which Indian origin Sikh has been given New South Wales Australian of the Year award 2023 for supporting the community affected by floods, bushfires, drought and Covid-19?

- Ans 1. Amar Singh
 2. Kamaljit Arora
 3. Navjit Kaur Brar
 4. Jatinder Singh

Question ID : 264330114989
Status : Answered
Chosen Option : 4

Q.17 Lime stone is the raw material of _____, among the given industries.

- Ans 1. cement industry
 2. plastic industry
 3. Furniture industry
 4. electronic industry

www.shikarat.com

Question ID : 264330115394
Status : Answered
Chosen Option : 1

Q.18 The 'Method of Election of the president' in the Indian Constitution has been borrowed from the _____ constitution.

- Ans 1. South African
 2. Irish
 3. United States of America
 4. German

Question ID : 26433064813
Status : Answered
Chosen Option : 2

Q.19 At independence, about _____ percent of the India's population was dependent on agriculture.

- Ans 1. 75
 2. 50
 3. 100
 4. 90

Question ID : 264330116158
Status : Answered
Chosen Option : 1

Q.20 The mode of nutrition in which organisms take in nutrients from dead and decaying matter is called _____ nutrition.

- Ans
- 1. Heterotrophic
 - 2. Autotrophic
 - 3. Saprotrophic
 - 4. Monotrophic

Question ID : 264330115254
Status : Answered
Chosen Option : 2

Section : Part-C-Elementary Mathematics

Q.1 The LCM of 32 and 40 equals to 9 less than the square of X. Find the positive value of X.

- Ans
- 1. 11
 - 2. 13
 - 3. 12
 - 4. 14

Question ID : 264330116647
Status : Not Answered
Chosen Option : --

Q.2 A man buys a toy car for ₹135 and sells it for ₹150, find his gain percentage.

- Ans
- 1. 11.11%
 - 2. 10.10%
 - 3. 11%
 - 4. 10%

www.shikarat.com

Question ID : 26433076173
Status : Answered
Chosen Option : 2

Q.3 Calculate the volume (in cm^3) of the cylinder having height 20 cm and base radius 14 cm.

- Ans
- 1. 13,300 cm^3
 - 2. 13,230 cm^3
 - 3. 12,200 cm^3
 - 4. 12,320 cm^3

Question ID : 26433075821
Status : Not Answered
Chosen Option : --

Q.4 The curved surface area of a cone is $4,455 \text{ cm}^2$ and its diameter is 105 cm . What is its slant height? Take $\pi = \frac{22}{7}$

- Ans
- 1. 25 cm
 - 2. 27 cm
 - 3. 23 cm
 - 4. 21 cm

Question ID : 26433076253
Status : Not Answered
Chosen Option : --

Q.5 Two numbers are in the ratio $3 : 8$. If 8 is added to each number, then the ratio becomes $1 : 2$. If 4 is subtracted from each number, then the ratio will become:

- Ans
- 1. $2 : 7$
 - 2. $3 : 8$
 - 3. $7 : 2$
 - 4. $8 : 3$

Question ID : 26433087371
Status : Not Answered
Chosen Option : --

Q.6 A farmer has 10 Parrots and 40 horses. Find the average number of legs per animal.

- Ans
- 1. 3.4
 - 2. 3.2
 - 3. 3.6
 - 4. 3.8

www.shikarat.com

Question ID : 264330116693
Status : Answered
Chosen Option : 3

Q.7 A sum of Rs.1,875 at 4% per annum increased to Rs.2,028 in certain time. If interest is compounded yearly, then what is the time period?

- Ans
- 1. 3.5 years
 - 2. 2 years
 - 3. 3 years
 - 4. 2.5 years

Question ID : 26433075677
Status : Answered
Chosen Option : 2

Q.8 37 is what percentage of 55? (correct up to two decimal places)

- Ans
- 1. 62.77%
 - 2. 69.41%
 - 3. 67.27%
 - 4. 64.91%

Question ID : 26433080298
Status : Answered
Chosen Option : 2

Q.9 A boy travelled from the home to the college at the rate of 35 km/h and walked back at the rate of 3 km/h. If the whole journey took 6 h 30 min, then the distance of the college from the home (correct to 2 decimal places) is:

- Ans
- 1. 17.58 km
 - 2. 18.01 km
 - 3. 17.96 km
 - 4. 17.25 km

Question ID : 26433081594
Status : Answered
Chosen Option : 2

Q.10 With a 10% discount on the marked price, a seller earns a 5% profit. If the marked price is increased by 5% and two successive discounts of 5% each are offered, how much percentage profit does the seller earn?

- Ans
- 1. 10%
 - 2. 11.5%
 - 3. 11%
 - 4. 10.5%

Question ID : 26433085450
Status : Not Answered
Chosen Option : --

Q.11 In a linear race of 1000 m, Saloni beat Shweta by 100 m, while Shweta beat Sonam by 150 m. By how many metres does Saloni beat Sonam, in the same race?

- Ans
- 1. 225 m
 - 2. 235 m
 - 3. 220 m
 - 4. 250 m

www.shikarat.com

Question ID : 26433080378
Status : Not Answered
Chosen Option : --

Q.12 A batsman makes a score of 97 runs in 15th inning and thus increases his average by 5. Find his average after 15th inning.

- Ans
- 1. 27
 - 2. 82
 - 3. 92
 - 4. 15

Question ID : 26433082642
Status : Not Answered
Chosen Option : --

Q.13 Four prime numbers are arranged in ascending order. The product of the first three numbers is 255 and that of the last three is 1955. The largest prime number is:

- Ans
- 1. 17
 - 2. 31
 - 3. 23
 - 4. 29

Question ID : 26433081471
Status : Not Answered
Chosen Option : --

Q.14 The current population of a city is 125000. If the population grows at the rate of 2% per year, what will be the population of the city after 3 years?

- Ans
- 1. 130896
 - 2. 132165
 - 3. 132651
 - 4. 133512

Question ID : 26433080338
Status : Answered
Chosen Option : 1

Q.15 The population of a town increased from 145000 to 200000 in a decade. What will be the simple growth rate percent of population per annum?

- Ans
- 1. 4.856 percent
 - 2. 5.789 percent
 - 3. 2.165 percent
 - 4. 3.793 percent

www.shikarat.com

Question ID : 264330116828
Status : Answered
Chosen Option : 4

Q.16 The marked price of a washing machine is Rs.23,500 and the shopkeeper sold it for Rs.20,915. What is the percentage of discount offered by the shopkeeper?

- Ans
- 1. 10%
 - 2. 9%
 - 3. 12%
 - 4. 11%

Question ID : 26433075189
Status : Not Answered
Chosen Option : --

Q.17 Find the mean proportional between 0.64 and 0.81.

- Ans
- 1. 0.66
 - 2. 0.70
 - 3. 0.72
 - 4. 0.68

Question ID : 26433080113
Status : Not Answered
Chosen Option : --

Q.18 Aman, Ram, and Kapil can complete a work in 68 days, 51 days, and 17 days respectively. If they work on alternate days such that Aman works on first day, Ram works on second day, Kapil works on third day and then again Aman works on fourth day and so on, then find the approximate number of days in which 50% of the work is completed.

- Ans 1. 16 days
 2. 19 days
 3. 15 days
 4. 18 days

Question ID : 264330116908
Status : Not Answered
Chosen Option : --

Q.19 A can paint seven chairs in an hour and B can paint four chairs in an hour. Determine how much time they will require to paint 55 chairs when they work together.

- Ans 1. 5 hours
 2. 6 hours
 3. 7 hours
 4. 4 hours

Question ID : 26433074311
Status : Not Answered
Chosen Option : --

Q.20 A dealer professes to sell his goods at a loss of 16%, but weights 750 gm in place of a kg weight. Find his total profit percentage.

- Ans 1. 15 Percent
 2. 11 Percent
 3. 14 Percent
 4. 12 Percent

www.shikarat.com

Question ID : 26433080170
Status : Not Answered
Chosen Option : --

Section : Part-D-English

Q.1 The sentence given below has one misspelt word. Spot the INCORRECTLY spelt word and select its correct spelling.

He wishes to be an orthopidic surgeon.

- Ans 1. Orthopadic
 2. Orthapedic
 3. Orthopaedic
 4. Ortopeedic

Question ID : 26433073557
Status : Answered
Chosen Option : 3

Q.2 Select the most appropriate synonym of the word given in brackets to fill in the blank.

Jack met with a/an _____ (deadly) accident.

- Ans
- 1. vital
 - 2. explicit
 - 3. deaden
 - 4. fatal

Question ID : 26433089076
Status : Answered
Chosen Option : 2

Q.3 Select the most appropriate synonym of the underlined word in the given sentence.

The country has an abundant supply of minerals.

- Ans
- 1. Ample
 - 2. Artificial
 - 3. Sparse
 - 4. Natural

Question ID : 26433072061
Status : Answered
Chosen Option : 1

Q.4 Select the most appropriate synonym for the underlined word in the given sentence.

The pearls produced in that oyster farm have lost all their lustre.

- Ans
- 1. gloom
 - 2. front
 - 3. shine
 - 4. lustful

www.shikarat.com

Question ID : 26433073753
Status : Answered
Chosen Option : 3

Q.5 Select the most appropriate option to fill in the blank.

The Conjuring is not a movie for the _____ of heart.

- Ans
- 1. strong
 - 2. faint
 - 3. paint
 - 4. emotional

Question ID : 26433084604
Status : Answered
Chosen Option : 4

Q.6 Select the most appropriate ANTONYM of the given word.

Acceptance

- Ans 1. Stoppage
 2. Trouble
 3. Rejection
 4. Allocation

Question ID : 26433073797
Status : Answered
Chosen Option : 3

Q.7 Select the INCORRECTLY spelt word.

- Ans 1. Salt
 2. Spead
 3. Task
 4. Brand

Question ID : 26433073495
Status : Answered
Chosen Option : 2

Q.8 Select the most appropriate option that can substitute the underlined segment in the given sentence.

I was delight in the moment I saw her.

- Ans 1. delighted at
 2. was delighted
 3. was delighting
 4. had delightful

www.shikarat.com

Question ID : 26433088167
Status : Answered
Chosen Option : 2

Q.9 Select the most appropriate meaning of the given idiom.

The whys and wherefores

- Ans 1. Underlying reason
 2. Interrogation
 3. Summary
 4. Minute observation

Question ID : 26433072433
Status : Answered
Chosen Option : 4

Q.10 Select the most appropriate option that can substitute the underlined segment in the given sentence.

As of now, they have finished the construction of the ground floor.

- Ans
- 1. construction of the ground floor
 - 2. construction of the ground flavor
 - 3. construction of the ground flower
 - 4. construction of the ground flounder

Question ID : 264330100991
Status : Answered
Chosen Option : 1

Q.11 Select the most appropriate option to fill in the blank.
The person in ragged clothes sleeping on the street is a _____ man.

- Ans
- 1. homeless
 - 2. wealthy
 - 3. cunning
 - 4. learned

Question ID : 26433085600
Status : Answered
Chosen Option : 1

Q.12 Select the most appropriate ANTONYM of the given word.

Solitary

- Ans
- 1. Gregarious
 - 2. Loan
 - 3. Indifferent
 - 4. Lone

www.shikarat.com

Question ID : 26433073867
Status : Answered
Chosen Option : 1

Q.13 Select the most appropriate ANTONYM of the given word.

Captivity

- Ans
- 1. Persistent
 - 2. Accused
 - 3. Haemorrhage
 - 4. Liberty

Question ID : 26433089114
Status : Answered
Chosen Option : 1

Q.14 The following sentence has been split into four segments. Identify the segment that contains a grammatical error.

My aunt Geeta, / is knowing / my friend Rudransh / very well.

- Ans
- 1. my friend Rudransh
 - 2. very well
 - 3. is knowing
 - 4. My aunt Geeta

Question ID : 26433086457

Status : Answered

Chosen Option : 3

Q.15 Select the most appropriate homonym to fill in the blank.

What _____ of a movie is this?

- Ans
- 1. keen
 - 2. con
 - 3. can
 - 4. kind

Question ID : 26433088791

Status : Answered

Chosen Option : 4

Comprehension:

In the following passage, some words have been deleted. Read the passage carefully and select the most appropriate option to fill in each blank.

The blockade of the national highways leading to the Manipur valley, called by the United Naga Council (UNC), has been in place since 1 November. This has severely affected life in the State, with shortages and (1)_____ costs of essential supplies such as fuel and food, even as demonetisation has (2)_____ problems. Blockades like this are not new to Manipur. In 2011, there was initially a hundred-day- plus blockade enforced by Kuki-led groups, and countered later by Naga groups, which together had a (3)_____ effect on life in Manipur. This time the blockade is in place to oppose the creation of new districts by the Okram Ibobi Singh government. On 9 December it issued a (4) _____ notification for the creation of seven new districts by bifurcating seven (of a total of nine) districts. This decision had as much to do with long-pending demands — in particular, for a new Kuki-majority district to be carved out of the larger Senapati hill district — as with easing administrative access to (5)_____ areas from the district headquarters.

SubQuestion No : 16

Q.16 Select the most appropriate option to fill in blank number 1.

- Ans
- 1. diminishing
 - 2. upfront
 - 3. escalating
 - 4. varying

Question ID : 26433088621

Status : Answered

Chosen Option : 2

Comprehension:

In the following passage, some words have been deleted. Read the passage carefully and select the most appropriate option to fill in each blank.

The blockade of the national highways leading to the Manipur valley, called by the United Naga Council (UNC), has been in place since 1 November. This has severely affected life in the State, with shortages and (1)_____ costs of essential supplies such as fuel and food, even as demonetisation has (2)_____ problems. Blockades like this are not new to Manipur. In 2011, there was initially a hundred-day- plus blockade enforced by Kuki-led groups, and countered later by Naga groups, which together had a (3)_____ effect on life in Manipur. This time the blockade is in place to oppose the creation of new districts by the Okram Ibobi Singh government. On 9 December it issued a (4) _____ notification for the creation of seven new districts by bifurcating seven (of a total of nine) districts. This decision had as much to do with long-pending demands — in particular, for a new Kuki-majority district to be carved out of the larger Senapati hill district — as with easing administrative access to (5)_____ areas from the district headquarters.

SubQuestion No : 17

Q.17 Select the most appropriate option to fill in blank number 2.

- Ans 1. exceed
 2. exacerbated
 3. pacified
 4. vindicated

Question ID : 26433088622

Status : Answered

Chosen Option : 2

Comprehension:

In the following passage, some words have been deleted. Read the passage carefully and select the most appropriate option to fill in each blank.

The blockade of the national highways leading to the Manipur valley, called by the United Naga Council (UNC), has been in place since 1 November. This has severely affected life in the State, with shortages and (1)_____ costs of essential supplies such as fuel and food, even as demonetisation has (2)_____ problems. Blockades like this are not new to Manipur. In 2011, there was initially a hundred-day- plus blockade enforced by Kuki-led groups, and countered later by Naga groups, which together had a (3)_____ effect on life in Manipur. This time the blockade is in place to oppose the creation of new districts by the Okram Ibobi Singh government. On 9 December it issued a (4) _____ notification for the creation of seven new districts by bifurcating seven (of a total of nine) districts. This decision had as much to do with long-pending demands — in particular, for a new Kuki-majority district to be carved out of the larger Senapati hill district — as with easing administrative access to (5)_____ areas from the district headquarters.

SubQuestion No : 18

Q.18 Select the most appropriate option to fill in blank number 3.

- Ans 1. counter
 2. acting
 3. debilitating
 4. befitting

Question ID : 26433088623

Status : Answered

Chosen Option : 1

Comprehension:

In the following passage, some words have been deleted. Read the passage carefully and select the most appropriate option to fill in each blank.

The blockade of the national highways leading to the Manipur valley, called by the United Naga Council (UNC), has been in place since 1 November. This has severely affected life in the State, with shortages and (1)_____ costs of essential supplies such as fuel and food, even as demonetisation has (2)_____ problems. Blockades like this are not new to Manipur. In 2011, there was initially a hundred-day- plus blockade enforced by Kuki-led groups, and countered later by Naga groups, which together had a (3)_____ effect on life in Manipur. This time the blockade is in place to oppose the creation of new districts by the Okram Ibobi Singh government. On 9 December it issued a (4) _____ notification for the creation of seven new districts by bifurcating seven (of a total of nine) districts. This decision had as much to do with long-pending demands — in particular, for a new Kuki-majority district to be carved out of the larger Senapati hill district — as with easing administrative access to (5)_____ areas from the district headquarters.

SubQuestion No : 19

Q.19 Select the most appropriate option to fill in blank number 4.

- Ans 1. lively
 2. detail
 3. live
 4. gazette

Question ID : 26433088624

Status : Answered

Chosen Option : 4

Comprehension:

In the following passage, some words have been deleted. Read the passage carefully and select the most appropriate option to fill in each blank.

The blockade of the national highways leading to the Manipur valley, called by the United Naga Council (UNC), has been in place since 1 November. This has severely affected life in the State, with shortages and (1)_____ costs of essential supplies such as fuel and food, even as demonetisation has (2)_____ problems. Blockades like this are not new to Manipur. In 2011, there was initially a hundred-day- plus blockade enforced by Kuki-led groups, and countered later by Naga groups, which together had a (3)_____ effect on life in Manipur. This time the blockade is in place to oppose the creation of new districts by the Okram Ibobi Singh government. On 9 December it issued a (4) _____ notification for the creation of seven new districts by bifurcating seven (of a total of nine) districts. This decision had as much to do with long-pending demands — in particular, for a new Kuki-majority district to be carved out of the larger Senapati hill district — as with easing administrative access to (5)_____ areas from the district headquarters.

SubQuestion No : 20

Q.20 Select the most appropriate option to fill in blank number 5.

- Ans 1. offshore
 2. secluded
 3. far-flung
 4. outskirts

Question ID : 26433088625

Status : Answered

Chosen Option : 4

Q.1 निम्न वाक्य में अनुपयुक्त शब्द-प्रयोग सम्बन्धी अशुद्धि दूर करने के लिए, रेखांकित भाग को उचित विकल्प चुनकर प्रतिस्थापित करें-
'हिन्दी-साहित्य में आचार्य रामचंद्र शुक्ल एक बड़े व्याख्याता माने जाते हैं।'

- Ans
- ✓ 1. एक उत्कृष्ट विश्लेषक
 - ✗ 2. बड़े अच्छे वक्ता
 - ✗ 3. एक अच्छे वर्चक
 - ✗ 4. एक बड़े साहित्यक

Question ID : 26433062805
Status : Not Answered
Chosen Option : --

Q.2 दिए गए विकल्पों में से कौन सा शब्द निम्नलिखित वाक्य में रेखांकित शब्द का पर्यायवाची नहीं है?
रासबिहारी बोस दिल्ली 'षड्यन्त्र' के मुख्य अभियुक्त थे।

- Ans
- ✗ 1. साजिश
 - ✓ 2. साजिद
 - ✗ 3. कुचक्र
 - ✗ 4. दुरभिसंधि

Question ID : 26433091340
Status : Not Answered
Chosen Option : --

Q.3 रिक्त स्थान की पूर्ति उचित कारक चिन्ह से करें-
श्याम मीरा _____ खिलौने लाया।

- Ans
- ✗ 1. का
 - ✗ 2. में
 - ✗ 3. ने
 - ✓ 4. के लिए

www.shikarat.com

Question ID : 26433085031
Status : Not Answered
Chosen Option : --

Q.4 भगवान दिवाकर जीवनदायी हैं।

रेखांकित शब्द के उचित पर्यायवाची शब्द का चयन कीजिए।

- Ans
- ✓ 1. सूर्य
 - ✗ 2. अब्ज
 - ✗ 3. नयन
 - ✗ 4. शशि

Question ID : 26433079620
Status : Not Answered
Chosen Option : --

Q.5 निम्नलिखित मुहावरे के लिय उपयुक्त सार्थक शब्द है-
जी अच्छा होना

- Ans
- 1. रंग विरंगी
 - 2. हिम्मत करना
 - 3. बहाना करना
 - 4. तबियत ठीक होना

Question ID : 26433065770
Status : Not Answered
Chosen Option : --

Q.6 निम्नलिखित वाक्य में त्रुटि पहचानें-
मैंने हाथ जोड़ दिया।

- Ans
- 1. हाथ
 - 2. जोड़
 - 3. मैंने
 - 4. दीया

Question ID : 26433066821
Status : Not Answered
Chosen Option : --

Q.7 मैंने विद्यालय के प्रधानाचार्य से प्रार्थना की कि मुझे छात्रवृत्ति प्रदान करें।
उपरोक्त वाक्य में प्रयुक्त 'प्रार्थना' शब्द का सही अर्थ है -

- Ans
- 1. अपनी बात मनवाने के लिए कहना
 - 2. आग्रह पूर्वक विनती करना
 - 3. विनय पूर्वक विनती करना
 - 4. तर्क से अपनी बात रखना

www.shikarat.com

Question ID : 26433080914
Status : Not Answered
Chosen Option : --

Q.8 वाक्यांश और उसके लिए एक शब्द का निम्न में से कौन सा युग्म अशुद्ध है?

- Ans
- 1. जो किसी से जीता न जा सके-अजेय
 - 2. नाप तौलकर खर्च करने वाला-मितभाषी
 - 3. सात दिन का समूह-सप्ताह
 - 4. लाभ पाने की इच्छा-लिप्सा

Question ID : 264330109529
Status : Not Answered
Chosen Option : --

Q.9 निम्नलिखित वाक्य में रेखांकित खंड के स्थान पर प्रयुक्त होने वाले सबसे उपयुक्त विकल्प का चयन कीजिए-

वह अतिथि सेवा के तत्पर लिए है।

- Ans
- 1. तत्पर है के लिए
 - 2. के लिए तत्पर है
 - 3. तत्पर के लिए है
 - 4. के लिए है तत्पर

Question ID : 26433070051

Status : Not Answered

Chosen Option : --

Q.10 'अनुसंधान _____'

उपर्युक्त वाक्य में रिक्त स्थान के लिए उपयुक्त वाक्यांश का चयन विकल्पों में से कीजिए।

- Ans
- 1. द्वारा खोज का अर्थ होता है।
 - 2. की अर्थ में खोज होता है।
 - 3. खोज का अनर्थ होता है।
 - 4. का अर्थ खोज होता है।

Question ID : 26433067035

Status : Not Answered

Chosen Option : --

Q.11 रेखांकित शब्द-समूह के लिए सर्वाधिक उपयुक्त विकल्प चुनें।
आकाश में इतने तारे हैं कि गिने न जा सके।

- Ans
- 1. गिनती के
 - 2. अनगिनत
 - 3. असंख्य
 - 4. गणनीय

www.shikarat.com

Question ID : 26433062281

Status : Not Answered

Chosen Option : --

Q.12 अरे ! साँप कहाँ गया ?

इस वाक्य में प्रयुक्त क्रिया विशेषण 'कहाँ' किस प्रकार का क्रियाविशेषण है ?

- Ans
- 1. यौगिक क्रिया विशेषण
 - 2. साधारण क्रिया विशेषण
 - 3. मूल क्रिया विशेषण
 - 4. अनुबद्ध क्रिया विशेषण

Question ID : 26433079231

Status : Not Answered

Chosen Option : --

Q.13 रिक्तेश को जब कक्षा में प्रथम आने का समाचार मिला, तो उसकी _____ खिल गई।
रिक्त स्थान की पूर्ति उचित शब्द द्वारा कीजिए।

- Ans
- 1. आँखे
 - 2. चेहरा
 - 3. बाँछे
 - 4. मुस्कान

Question ID : 26433062618
Status : Not Answered
Chosen Option : --

Q.14 निम्नलिखित में से शुद्ध वाक्य है-

- Ans
- 1. बहुत लोग ईक साथ दौड़ पड़े।
 - 2. बहुत लोग एक साथ दौड़ पड़े।
 - 3. बहुत लोग एक सथ दौड़ पड़े।
 - 4. बहुत लोग एक साथ दौठ पड़े।

Question ID : 26433066842
Status : Not Answered
Chosen Option : --

Q.15 निम्न में से कौन सा 'जल' शब्द का पर्यायवाची है?

- Ans
- 1. नीरज
 - 2. नीर
 - 3. अंबुधि
 - 4. वारिज

www.shikarat.com

Question ID : 26433092014
Status : Not Answered
Chosen Option : --

Comprehension:

निम्नलिखित गद्यांश में कुछ शब्दों को हटा दिया गया है। दिए गए विकल्पों की सहायता से रिक्त स्थानों की पूर्ति कीजिए। प्रत्येक संख्या के लिए सबसे उपयुक्त विकल्प का चयन करें।

आत्मनिर्भरता से तात्पर्य है- अपने ऊपर 1. _____ रहना। जब मनुष्य अपने कार्य 2. _____ करता है तो आत्मनिर्भर कहलाता है। बहुत से कार्य वह दूसरों के 3. _____ करता है। आत्मनिर्भरता का अर्थ यह है कि जब किसी कार्य को करने का मन करे, उसके लिए पूर्ण 4. _____ और लगन का परिचय दे। स्वयं अपने सहारे उसे सिद्ध करने का 5. _____ करें।

SubQuestion No : 16

Q.16 रिक्त स्थान 1 की पूर्ति के लिए सबसे उपयुक्त विकल्प का चयन कीजिए।

- Ans
- 1. निर्भर
 - 2. प्रवृत्ति
 - 3. सहारा
 - 4. दूभर

Question ID : 264330111077
Status : Not Answered
Chosen Option : --

Comprehension:

निम्नलिखित गद्यांश में कुछ शब्दों को हटा दिया गया है। दिए गए विकल्पों की सहायता से रिक्त स्थानों की पूर्ति कीजिए। प्रत्येक संख्या के लिए सबसे उपयुक्त विकल्प का चयन करें।

आत्मनिर्भरता से तात्पर्य है- अपने ऊपर 1. _____ रहना। जब मनुष्य अपने कार्य 2. _____ करता है तो आत्मनिर्भर कहलाता है। बहुत से कार्य वह दूसरों के 3. _____ करता है। आत्मनिर्भरता का अर्थ यह है कि जब किसी कार्य को करने का मन करे, उसके लिए पूर्ण 4. _____ और लगन का परिचय दे। स्वयं अपने सहारे उसे सिद्ध करने का 5. _____ करें।

SubQuestion No : 17

Q.17 रिक्त स्थान 2 की पूर्ति के लिए सबसे उपयुक्त विकल्प का चयन कीजिए।

- Ans 1. स्वयं
 2. श्रेष्ठ
 3. नहीं
 4. कल

Question ID : 264330111078

Status : Not Answered

Chosen Option : --

Comprehension:

निम्नलिखित गद्यांश में कुछ शब्दों को हटा दिया गया है। दिए गए विकल्पों की सहायता से रिक्त स्थानों की पूर्ति कीजिए। प्रत्येक संख्या के लिए सबसे उपयुक्त विकल्प का चयन करें।

आत्मनिर्भरता से तात्पर्य है- अपने ऊपर 1. _____ रहना। जब मनुष्य अपने कार्य 2. _____ करता है तो आत्मनिर्भर कहलाता है। बहुत से कार्य वह दूसरों के 3. _____ करता है। आत्मनिर्भरता का अर्थ यह है कि जब किसी कार्य को करने का मन करे, उसके लिए पूर्ण 4. _____ और लगन का परिचय दे। स्वयं अपने सहारे उसे सिद्ध करने का 5. _____ करें।

SubQuestion No : 18

Q.18 रिक्त स्थान 3 की पूर्ति के लिए सबसे उपयुक्त विकल्प का चयन कीजिए।

- Ans 1. स्थिति
 2. लक्ष्य
 3. सहारे
 4. प्रकार

Question ID : 264330111079

Status : Not Answered

Chosen Option : --

Comprehension:

निम्नलिखित गद्यांश में कुछ शब्दों को हटा दिया गया है। दिए गए विकल्पों की सहायता से रिक्त स्थानों की पूर्ति कीजिए। प्रत्येक संख्या के लिए सबसे उपयुक्त विकल्प का चयन करें।

आत्मनिर्भरता से तात्पर्य है- अपने ऊपर 1. _____ रहना। जब मनुष्य अपने कार्य 2. _____ करता है तो आत्मनिर्भर कहलाता है। बहुत से कार्य वह दूसरों के 3. _____ करता है। आत्मनिर्भरता का अर्थ यह है कि जब किसी कार्य को करने का मन करे, उसके लिए पूर्ण 4. _____ और लगन का परिचय दे। स्वयं अपने सहारे उसे सिद्ध करने का 5. _____ करें।

SubQuestion No : 19

Q.19 रिक्त स्थान 4 की पूर्ति के लिए सबसे उपयुक्त विकल्प का चयन कीजिए।

- Ans 1. अकर्मण्यता
 2. तत्परता
 3. विफलता
 4. सहायता

Question ID : 264330111080

Status : Not Answered

Chosen Option : --

Comprehension:

निम्नलिखित गद्यांश में कुछ शब्दों को हटा दिया गया है। दिए गए विकल्पों की सहायता से रिक्त स्थानों की पूर्ति कीजिए। प्रत्येक संख्या के लिए सबसे उपयुक्त विकल्प का चयन करें।

आत्मनिर्भरता से तात्पर्य है- अपने ऊपर 1. _____ रहना। जब मनुष्य अपने कार्य 2. _____ करता है तो आत्मनिर्भर कहलाता है। बहुत से कार्य वह दूसरों के 3. _____ करता है। आत्मनिर्भरता का अर्थ यह है कि जब किसी कार्य को करने का मन करे, उसके लिए पूर्ण 4. _____ और लगन का परिचय दे। स्वयं अपने सहारे उसे सिद्ध करने का 5. _____ करें।

SubQuestion No : 20

Q.20 रिक्त स्थान 5 की पूर्ति के लिए सबसे उपयुक्त विकल्प का चयन कीजिए।

- Ans 1. विकास
 2. प्रयास
 3. पाठ
 4. ध्यान

Question ID : 264330111081

Status : Not Answered

Chosen Option : --