

# Constable GD in CAPFs SSF Rifleman GD in Assam Rifles and Sepoy in NCB Examination 2022

Roll Number	
Candidate Name	
Venue Name	iON Digital Zone iDZ Akshay Colony
Exam Date	17/01/2023
Exam Time	11:45 AM - 12:45 PM
Subject	Constable GD Examination 2022

## Section : Part-A-General Intelligence and Reasoning

**Q.1** Select the option that is related to the third word in the same way as the second word is related to the first word.

(The words must be considered as meaningful English words and must not be related to each other based on the number of letters/ number of consonants / vowels in the word)

Doctor : Hospital :: Astronomer : ?

Ans  1. Observatory

2. Profession

3. Ship

4. Showroom

Question ID : 26433068056

Status : Answered

Chosen Option : 2

**Q.2** Select the correct mirror image of the given figure, when the mirror is placed at MN as shown below.



Ans  1. M f O R r 7 p

2. M f O R r 7 p

3. W f O R r 7 p

4. W f O R r 7 p

Question ID : 26433090150

Status : Answered

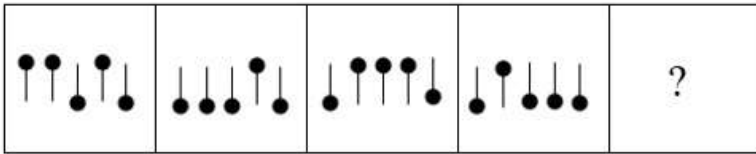
Chosen Option : 2

Q.3 Which of the following terms will replace the question mark (?) in the given series?  
SDR, XHU, CLX, ?, MTD, RXG

- Ans
- ✓ 1. HPA
  - ✗ 2. HQZ
  - ✗ 3. GQZ
  - ✗ 4. GPA

Question ID : 26433069457  
Status : Answered  
Chosen Option : 4

Q.4 Select the figure from among the given options that can replace the question mark (?) in the following series.



Ans

- ✗ 1.
- ✗ 2.
- ✓ 3.
- ✗ 4.

[www.shikarat.com](http://www.shikarat.com)

Question ID : 26433086244  
Status : Answered  
Chosen Option : 2

Q.5 Eight people, D, E, G, H, K, L, S and T are sitting in a straight line, facing north. E sits second from the left end of the line. No one sits between H and E. G sits fourth to the right of H. K sits to the immediate left of G. Only two people sit between K and D. L sits third to the right of S. How many people sit between S and T?

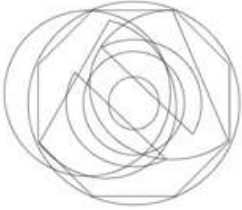
- Ans
- 1. One
  - 2. Three
  - 3. More than three
  - 4. None

Question ID : 26433092757

Status : Answered


Chosen Option : 3

Q.6 Select the option figure which is embedded in the given figure. (Rotation is NOT allowed)




Ans


1.




2.



3.



4.



[www.shikarat.com](http://www.shikarat.com)

Question ID : 26433085751

Status : Answered

Chosen Option : 2

Q.7 Which of the following numbers will replace the question mark (?) in the given series?  
1, 4, 27, ?, 3125

- Ans
- 1. 128
  - 2. 64
  - 3. 1024
  - 4. 256

Question ID : 26433085704  
Status : Answered  
Chosen Option : 4

Q.8 'A + B' means 'A is the daughter of B'  
'A - B' means 'A is the husband of B'  
'A × B' means 'A is the mother of B'  
'A ÷ B' means 'A is the brother of B'  
If  $D + E + F - G \times H \div I - J$ , then which of the following statements is NOT correct?

- Ans
- 1. E is the sister of I.
  - 2. E is the sister of H.
  - 3. D is the sister of I.
  - 4. E is the daughter of G.

Question ID : 26433090049  
Status : Answered  
Chosen Option : 3

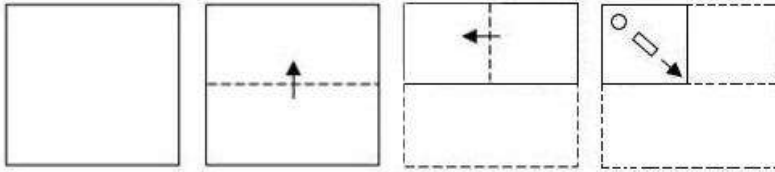
Q.9 In a certain code language, 'NATION' is written as 'MZGRLM' and 'PRINTS' is written as 'KIRMGH'. How will 'BOTTLE' be written in that language?

- Ans
- 1. YGGLOV
  - 2. OYGGLV
  - 3. YLGGOV
  - 4. OVGGYL

www.shikarat.com

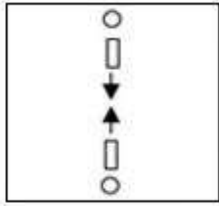
Question ID : 26433070330  
Status : Answered  
Chosen Option : 4

Q.10 A paper is folded and cut as shown below. How will it appear when unfolded?

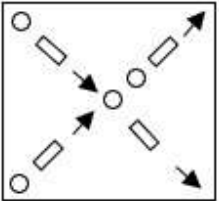


Ans

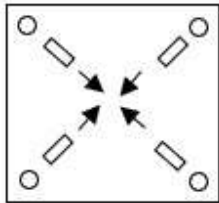
✗ 1.



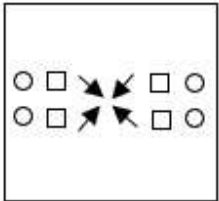
✗ 2.



✓ 3.



✗ 4.



www.shikarat.com

Question ID : 26433090958

Status : Answered

Chosen Option : 1

Q.11 In a certain code, the word 'TEACHER' is written as 'RCYAFCP'. The word 'SCHOOL' is written as 'QAFMMJ'. How is the word 'SUBJECT' written in the same code?

Ans ✗ 1. UWDLGEV

✗ 2. TVCKFDU

✓ 3. QSZHCAR

✗ 4. RTAIDBS

Question ID : 26433090112

Status : Answered

Chosen Option : 2

Q.12 Three statements are given followed by three conclusions numbered I, II and III. Assuming the statements to be true, even if they seem to be at variance with commonly known facts, decide which of the conclusions logically follow(s) from the statements.

Statements:

All cows are mammals.

All donkeys are mammals.

All mammals are animals.

Conclusions:

I. All donkeys are animals.

II. All animals are donkeys.

III. Some cows are donkeys.

Ans  1. Only conclusions II and III follow

2. Only conclusion I follows

3. All conclusions follow

4. Only conclusions I and II follow

Question ID : 26433091716

Status : Not Answered

Chosen Option : --

Q.13 Which of the following numbers will replace the question mark (?) in the given series?

5, 8, ?, 23, 35, 50, 68

Ans  1. 10

2. 14

3. 16

4. 12

Question ID : 26433090065

Status : Answered

Chosen Option : 3

www.shikarat.com

Q.14 Which two signs should be interchanged to make the below equation mathematically correct?

$63 + 5 \div 35 - 7 \times 21 = 23$

Ans  1.  $\times$  and  $+$

2.  $+$  and  $-$

3.  $\div$  and  $\times$

4.  $\div$  and  $+$

Question ID : 264330117568

Status : Not Answered

Chosen Option : --

Q.15 Select the option that is related to the third term in the same way as the second term is related to the first term and the sixth term is related to the fifth term.

4 : 74 :: 6 : ? :: 7 : 353

Ans  1. 256

2. 450

3. 216

4. 226

Question ID : 26433078850

Status : Answered

Chosen Option : 3

Q.16 Select the option that is related to the third word in the same way as the second word is related to the first word.  
Maharashtra : Mumbai :: West Bengal : ?  
(The words must be considered as meaningful English words and must NOT be related to each other based on the number of letters/number of consonants/vowels in the word)

- Ans
- 1. Punjab
  - 2. Bihar
  - 3. Kolkata
  - 4. Bhopal

Question ID : 26433087199  
Status : Answered  
Chosen Option : 3

Q.17 Seven people P,Q,R,S,T,U and V are sitting in a straight line adjacent to one another, facing the north (not necessarily in the given order).  
U is sitting to the immediate left of V. R is sitting fifth to the left of V. R is the immediate neighbour of P and T. S is sitting third to the right of R.  
Who is sitting to the immediate right of Q?

- Ans
- 1. T
  - 2. S
  - 3. V
  - 4. U

Question ID : 26433080707  
Status : Not Answered  
Chosen Option : --

Q.18 Select the correct combination of mathematical signs to sequentially replace the \* signs and to balance the given equation.  
 $200 * 2 * 10 * 8 * 40 * 20$

- Ans
- 1. -, +, ÷, =, ×
  - 2. ×, =, ÷, +, -
  - 3. ÷, =, ×, +, -
  - 4. ×, +, =, ÷, -

Question ID : 26433094997  
Status : Answered  
Chosen Option : 2

Q.19 Which option represents the correct order of the given words as they would appear in an English dictionary?

1. FLOWER
2. FLETCHER
3. FLORIST
4. FILTER
5. FLEUR

- Ans
- 1. 2, 4, 3, 5, 1
  - 2. 4, 5, 2, 3, 1
  - 3. 2, 4, 5, 3, 1
  - 4. 4, 2, 5, 3, 1

Question ID : 26433092547  
Status : Answered  
Chosen Option : 2

Q.20 Which letter-cluster will replace the question mark (?) to complete the given series?  
EMRT, ?, IGVN, KDXK, MAZH

- Ans
- 1. GJTQ
  - 2. IITP
  - 3. HIUV
  - 4. HKSR

Question ID : 26433080423  
Status : Answered  
Chosen Option : 1

Section : Part-B-General Knowledge and General awareness

Q.1 In cricket, when a legally delivered ball passes a batsman without touching his bat or person and runs are scored off that ball, then those runs are scored as \_\_\_\_.

- Ans
- 1. Leg byes
  - 2. Wide ball
  - 3. Byes
  - 4. LBW

Question ID : 26433096230  
Status : Answered  
Chosen Option : 2

Q.2 In India, the stagnation in agriculture during the colonial rule was permanently broken by the \_\_\_\_\_.

- Ans
- 1. old cropping technique
  - 2. Green Revolution
  - 3. industrial licensing
  - 4. credit facility

www.shikarat.com

Question ID : 26433064869  
Status : Answered  
Chosen Option : 2

Q.3 The portion of agricultural produce which is sold in the market by the farmers is called \_\_\_\_\_ surplus.

- Ans
- 1. corrected
  - 2. imported
  - 3. balanced
  - 4. marketed

Question ID : 264330115437  
Status : Answered  
Chosen Option : 2



Q.4 Who inaugurated the new Durbar Hall at Raj Bhavan in Malabar Hill, Mumbai, in February 2022?

- Ans
- 1. Shri Amit Shah
  - 2. Shri Ram Nath Kovind
  - 3. Shri Uddhav Thackeray
  - 4. Shri Narendra Modi

Question ID : 26433081827  
Status : Answered  
Chosen Option : 4

Q.5 Electrolysis of water is an example of \_\_\_\_\_.

- Ans
- 1. double displacement
  - 2. displacement reaction
  - 3. decomposition reaction
  - 4. combination reaction

Question ID : 264330115268  
Status : Answered  
Chosen Option : 2

Q.6 Articles 25 to 28 of the Indian Constitution refer to the:

- Ans
- 1. right to freedom of religion
  - 2. right against exploitation
  - 3. right to constitutional remedies
  - 4. cultural and educational rights

www.shikarat.com

Question ID : 26433090670  
Status : Answered  
Chosen Option : 2

Q.7 Which of the following festivals is NOT celebrated in Uttar Pradesh?

- Ans
- 1. Taj Mahotsav
  - 2. Nuakhai
  - 3. Buddha Mahotsav
  - 4. Ganga Mahotsav

Question ID : 264330106221  
Status : Answered  
Chosen Option : 4

Q.8 What is the share of India in the world's water resources?

- Ans
- 1. 10%
  - 2. 15%
  - 3. 8%
  - 4. 4%

Question ID : 26433092217  
Status : Answered  
Chosen Option : 2

Q.9 Who among the following has been honoured with Padma Shri for the extensive contribution in Mohiniattam?

- Ans  1. Kanak Rele  
 2. Suchitra Ella  
 3. Mahaboob Subhani  
 4. K. P. Kittappa Pillai

Question ID : 264330115897  
Status : Answered  
Chosen Option : 3

Q.10 Which of the following is not a category of the Indian Railways tracks?

- Ans  1. Foot gauge  
 2. Metre gauge  
 3. Broad gauge  
 4. Narrow gauge

Question ID : 264330115602  
Status : Answered  
Chosen Option : 2

Q.11 In Andhra Pradesh, who is the Chairman of the state business Advisory Committee?

- Ans  1. The Speaker of state legislature  
 2. The Chief Minister of the state  
 3. The Governor of the state  
 4. The Finance Minister of the state

www.shikarat.com

Question ID : 26433090680  
Status : Answered  
Chosen Option : 2

Q.12 How many events are held in a Decathlon?

- Ans  1. 8  
 2. 12  
 3. 10  
 4. 9

Question ID : 26433092335  
Status : Answered  
Chosen Option : 2

Q.13 Who among the following defeated Dharmendra Yadav to become Member of Parliament from Azamgarh constituency, Uttar Pradesh in June 2022?

- Ans  1. Yashwant Singh  
 2. Akhilesh Yadav  
 3. Ghanshyam Singh Lodhi  
 4. Dinesh Lal Yadav

Question ID : 264330114975  
Status : Answered  
Chosen Option : 3

Q.14 As of November 2022, Basavaraj Bommai is the chief minister of \_\_\_\_\_ state of India.

- Ans
- 1. Telangana
  - 2. Kerala
  - 3. Karnataka
  - 4. Tamil Nadu

Question ID : 264330114891  
Status : Answered  
Chosen Option : 3

Q.15 Per capita income denotes average \_\_\_\_\_ earned by an individual of that country.

- Ans
- 1. capital
  - 2. loan
  - 3. liability
  - 4. income

Question ID : 264330115355  
Status : Answered  
Chosen Option : 4

Q.16 Which of the following liquid has the highest surface tension?

- Ans
- 1. Ethanol
  - 2. Methanol
  - 3. Ethane
  - 4. Water

www.shikarat.com

Question ID : 26433089651  
Status : Not Answered  
Chosen Option : --

Q.17 In February \_\_\_\_\_, Mahatma Gandhi decided to withdraw the Non-Cooperation Movement.

- Ans
- 1. 1925
  - 2. 1922
  - 3. 1924
  - 4. 1927

Question ID : 26433089902  
Status : Answered  
Chosen Option : 3

Q.18 The Shunga dynasty was established by whom among the following rulers?

- Ans
- 1. Pushyamitra
  - 2. Vasumitra
  - 3. Agnimitra
  - 4. Vajramitra

Question ID : 26433099154  
Status : Answered  
Chosen Option : 2

Q.19 Sitara Devi was famous for which of the following classical dance forms?

- Ans  1. Bharatnatyam  
 2. Kathak  
 3. Manipuri  
 4. Kathakali

Question ID : 26433074077  
Status : Answered  
Chosen Option : 1

Q.20 Unemployment is measured in India on the methods prescribed by the:

- Ans  1. National Stock Exchange  
 2. National Employment Department  
 3. Reserve Bank of India  
 4. National Sample Survey Organisation

Question ID : 26433092892  
Status : Answered  
Chosen Option : 3

Section : Part-C-Elementary Mathematics

Q.1 A and B together do a piece of work in 12 days, B and C in 15 days, and C and A in 20 days. In how many days can they finish the work if all of them work together?

- Ans  1. 13  
 2. 9  
 3. 10  
 4. 12

www.shikarat.com

Question ID : 26433090264  
Status : Answered  
Chosen Option : 1

Q.2 A thief running at 7 km/h is chased by a policeman, whose speed is 8 km/h. If the thief is 85 m ahead of the policeman, then the time required for the policeman to catch the thief will be:

- Ans  1. 5.1 minutes  
 2. 4.3 minutes  
 3. 6.2 minutes  
 4. 3.2 minutes

Question ID : 26433080132  
Status : Answered  
Chosen Option : 2

Q.3 If  $42 \div 2 + m \times 3 - 22 \div 11 + 3 = 28$ , then the value of m is:

- Ans  1. 3  
 2. 2  
 3. 1  
 4. 0

Question ID : 26433087333  
Status : Answered  
Chosen Option : 1

Q.4 A and B can complete a work in 18 days and 27 days, respectively. They start working together and after 8 days, A leaves. In how many days B complete the remaining work?

- Ans
- 1. 5
  - 2. 9
  - 3. 8
  - 4. 7

Question ID : 26433081072  
Status : Not Answered  
Chosen Option : --

Q.5 If the surface area of a sphere is  $30,184 \text{ cm}^2$ , then find its volume (use  $\pi = \frac{22}{7}$ ).

- Ans
- 1.  $\frac{616}{3} \times (49)^3 \text{ cm}^3$
  - 2.  $\frac{620}{3} \times (49)^2 \text{ cm}^3$
  - 3.  $\frac{616}{3} \times (49)^2 \text{ cm}^3$
  - 4.  $\frac{616}{3} \times (49) \text{ cm}^3$

Question ID : 26433083058  
Status : Not Answered  
Chosen Option : --

Q.6 40 litres of a mixture has 10% alcohol and the rest water. If 4 litres of water be mixed in it, the percentage of alcohol in the new mixture will be:

- Ans
- 1.  $9\frac{2}{11}\%$
  - 2.  $11\frac{1}{11}\%$
  - 3.  $9\frac{1}{11}\%$
  - 4.  $11\frac{1}{9}\%$

www.shikarat.com

Question ID : 26433080367  
Status : Not Answered  
Chosen Option : --

Q.7 14 men can build a 55 m long wall in 5 days. What length of a similar wall can be built by 21 men in 4 days?

- Ans
- 1. 60 m
  - 2. 58 m
  - 3. 62 m
  - 4. 66 m

Question ID : 26433082396  
Status : Answered  
Chosen Option : 3

Q.8 The greatest number of three digits that is divisible by 3,12, 24 and 36 is:

Ans  1. 936

2. 924

3. 984

4. 900

Question ID : 26433091514

Status : Answered

Chosen Option : 2

Q.9 The price of an item decreased by 8% and then increased by 12%. What is the approximate effective change in the price in percentage?

Ans  1. 16.67%

2. 3.5%

3. 4%

4. 3%

Question ID : 26433085434

Status : Not Answered

Chosen Option : --

Q.10 If a principal of ₹22,445 is deposited at the rate of 30% per annum for two years and interest is compounding annually, then what will be the amount (Approximately)?

Ans  1. ₹37,339

2. ₹37,933

3. ₹39,337

4. ₹39,733

www.shikarat.com

Question ID : 26433092028

Status : Answered

Chosen Option : 3

Q.11 R buys two cars of same prices. He sells one at a profit of 12% and the other at a loss of 8%. His overall percentage of profit or loss is :

Ans  1. 2% loss

2. 4% loss

3. 2% profit

4. 4% profit

Question ID : 26433081708

Status : Not Answered

Chosen Option : --

Q.12 A policeman starts chasing a thief who is at a distance of 600 metres. The speeds of the policeman and the thief are 12 km/h and 10 km/h respectively. In what time will the thief be caught?

- Ans  1. 18 min  
 2. 17 min  
 3. 15 min  
 4. 16 min

Question ID : 26433080196  
Status : Answered  
Chosen Option : 4

Q.13 In what ratio must a grocer mix two varieties of tea worth Rs.120 per kg and Rs.130 per kg, so that by selling the mixture at Rs.136.40 per kg, he may gain 10%?

- Ans  1. 3 : 2  
 2. 1 : 2  
 3. 3 : 4  
 4. 2 : 5

Question ID : 26433082708  
Status : Answered  
Chosen Option : 4

Q.14 The radius of a cylindrical vessel is increased by 50% and the height is decreased by 50%.What is the change in its volume?

- Ans  1. 12.5% decrease  
 2. No change  
 3. 12.5% increase  
 4. 8% increase

www.shikarat.com

Question ID : 26433091904  
Status : Answered  
Chosen Option : 2

Q.15  $\frac{1}{3}$  of grocery is sold at 18% profit,  $\frac{1}{4}$  is sold at 25% profit, and the rest at 30% profit. If the total profit is ₹1,980, then find the value of the grocery.

- Ans  1. ₹8,200  
 2. ₹8,400  
 3. ₹8,000  
 4. ₹8,500

Question ID : 26433080169  
Status : Answered  
Chosen Option : 2

Q.16 A pen costs ₹121.5 and its marked price is ₹150. What should be two equal successive percentage discounts on marked price to have no profit or loss?

- Ans
- 1. 15%
  - 2. 11.56%
  - 3. 10%
  - 4. 12.56%

Question ID : 26433081711  
Status : Not Answered  
Chosen Option : --

Q.17 If the ratio of the radius and height of a cylinder is 3 : 2 and radius is 21 cm, then the curved surface area (in  $\text{cm}^2$ ) is: ( Use  $\pi = 22/7$  )

- Ans
- 1. 1948
  - 2. 1848
  - 3. 1884
  - 4. 1488

Question ID : 26433075822  
Status : Not Answered  
Chosen Option : --

Q.18 In an alloy of 60 grams, the ratio of gold and copper is 2 : 1. How much more of copper should be added to make the ratio 1 : 2?

- Ans
- 1. 40 grams
  - 2. 60 grams
  - 3. 80 grams
  - 4. 54 grams

www.shikarat.com

Question ID : 26433091898  
Status : Answered  
Chosen Option : 1

Q.19 A shopkeeper sells shirts at a price of ₹ 800 per shirt. He allows a discount of 10% to all customers making full cash payment, and to customers buying 10 shirts at a time, he gives two shirts free. If a customer is willing to take both the discounts, what net effective discount can he/she avail?( the shopkeeper charges for 10 shirts but gives two additional shirts in the same amount) this is only for clarity and not a part of stem . Stem language is correct

- Ans
- 1. 25%
  - 2. 15%
  - 3. 12.5%
  - 4. 10%

Question ID : 26433092144  
Status : Not Answered  
Chosen Option : --



Q.20 Abdul paid ₹5,832 after some years to a bank. He took ₹5,000 loan at the rate of 8% per annum to be compounded annually. Find the time (in years).

- Ans
- 1. 4
  - 2. 3
  - 3. 2
  - 4. 5

Question ID : 26433091557  
Status : Answered  
Chosen Option : 1

Section : Part-D-English

Q.1 Select the most appropriate option to substitute the underline segment in the given sentence.

Ever since that leak of private emails, everything the CEO has done has been viewed with suspicion.

- Ans
- 1. under wood
  - 2. under soil
  - 3. under a cloud
  - 4. under water

Question ID : 264330103756  
Status : Not Answered  
Chosen Option : --

Q.2 Select the most appropriate synonym of the underlined word.

All his attempts to save the wounded animal turned out to be futile.

- Ans
- 1. Worthwhile
  - 2. Mirthful
  - 3. Unsuccessful
  - 4. Foresightful

Question ID : 26433089060  
Status : Not Answered  
Chosen Option : --

Q.3 Identify and correct the INCORRECTLY spelt word in the given sentence.

Many people were enduring mental agony and health issues with the change in lifestyle.

- Ans
- 1. enduring
  - 2. heaolth
  - 3. mentel
  - 4. agouny

Question ID : 26433092319  
Status : Not Answered  
Chosen Option : --

Q.4 Select the most appropriate synonym of the word given below to fill in the blank in the following sentence.

Static

Society is not a/an \_\_\_\_\_ but a dynamic entity.

- Ans
- 1. independent
  - 2. capable
  - 3. variable
  - 4. inert

Question ID : 26433093262

Status : Not Answered

Chosen Option : --

Q.5 Select the most appropriate option that can substitute the underlined segment in the given sentence. If there is no need to substitute it, select 'No substitution'.  
She was embarrassed because her friends were laughing on her.

- Ans
- 1. her friends were laughing at her
  - 2. No substitution
  - 3. her friends were laughing to her
  - 4. her friends were laughing upon her

Question ID : 26433092940

Status : Not Answered

Chosen Option : --

Q.6 Select the most appropriate homonym to fill in the blank.

In order to keep \_\_\_\_\_ I jog for 45 minutes daily.

- Ans
- 1. fitt
  - 2. feet
  - 3. fit
  - 4. feat

www.shikarat.com

Question ID : 26433094734

Status : Answered

Chosen Option : 2

Q.7 Select the most appropriate option that can substitute the underlined segment in the given sentence. If there is no need to substitute it, select 'No substitution'.

Although my friends begged me, I chose not to go for the reunion.

- Ans
- 1. I choose no to go for the reunion.
  - 2. No substitution
  - 3. I have chose not to go for the reunion.
  - 4. I chose not to go to the reunion.

Question ID : 264330103767

Status : Answered

Chosen Option : 3

Q.8 Choose the sentence that contains correct spellings.

- Ans  1. The sage said that life is nothing but a journey of compormises.  
 2. The sage said that life is nothing but a journey of comprommizes.  
 3. The sage said that life is nothing but a journey of compromises.  
 4. The sage said that life is nothing but a journey of comprimises.

Question ID : 26433086499

Status : Answered

Chosen Option : 1

Q.9 Select the most appropriate ANTONYM of the word given in brackets to fill in the blank.

The employer is too \_\_\_\_\_ (generous) to give a bonus to the employees.

- Ans  1. cripple  
 2. stingy  
 3. caring  
 4. kind

Question ID : 26433070460

Status : Answered

Chosen Option : 4

Q.10 Select the appropriate idiom that can replace the underlined word/phrase in the following sentence.

Grandmother revealed the secret.

- Ans  1. let the chips fall where they may  
 2. let things slide  
 3. let the cat out of the bag  
 4. let the chance slip by

www.shikarat.com

Question ID : 26433073280

Status : Not Answered

Chosen Option : --

Q.11 Which of the following options is most similar in meaning to the given word?  
Magnificent

- Ans  1. Evil  
 2. Enlarge  
 3. Grand  
 4. Capable

Question ID : 26433088812

Status : Not Answered

Chosen Option : --

Q.12 Select the most appropriate synonym of the given word.

Titan

- Ans
- 1. Predator
  - 2. Midget
  - 3. Giant
  - 4. Puny

Question ID : 26433072096

Status : Not Answered

Chosen Option : --

Q.13 Select the most appropriate antonym of the bracketed word to fill in the blank.

The land near arid regions is not \_\_\_\_\_ (barren) enough for growing crops or any kind of vegetation.

- Ans
- 1. stark
  - 2. fertile
  - 3. arid
  - 4. devoid

Question ID : 26433060716

Status : Not Answered

Chosen Option : --

Q.14 Which of the following sentences is an example of present progressive tense?

- Ans
- 1. Why has he delayed the work?
  - 2. Why is he crying like that?
  - 3. Why had he been staying in Delhi for such a long time?
  - 4. Why were you worried about that?

Question ID : 264330108883

Status : Not Answered

Chosen Option : --

Q.15 Select the most appropriate option that can substitute the underlined segment in the given sentence.

The principal went a step farther to declare 12th June as a holiday for the entire group of schools.

- Ans
- 1. goes a step farther
  - 2. went a step further
  - 3. went a step further more
  - 4. went a step farther more

Question ID : 26433091770

Status : Not Answered

Chosen Option : --

**Comprehension:**

In the following passage, some words have been deleted. Read the passage carefully and select the most appropriate option to fill in each blank.

One of the greatest (1)\_\_\_\_\_ to textiles is light. It is a form of energy that can fade colour and cause chemical and physical (2)\_\_\_\_\_ of textile fibres. Exposure to both, natural and ultra violet light can threaten the (3)\_\_\_\_\_ of textiles. Light damage occurs progressively. You must have noticed at home that the most faded folds of curtains are the first to (4)\_\_\_\_\_ and fall apart. Fading of colours and alterations of hues are the (5)\_\_\_\_\_ easy-to-detect signs of light damage.

**SubQuestion No : 16****Q.16** Select the most appropriate option to fill in blank number 1.

- Ans  1. threats  
 2. additions  
 3. beauties  
 4. warnings

Question ID : 26433098989

Status : Answered

Chosen Option : 2

**Comprehension:**

In the following passage, some words have been deleted. Read the passage carefully and select the most appropriate option to fill in each blank.

One of the greatest (1)\_\_\_\_\_ to textiles is light. It is a form of energy that can fade colour and cause chemical and physical (2)\_\_\_\_\_ of textile fibres. Exposure to both, natural and ultra violet light can threaten the (3)\_\_\_\_\_ of textiles. Light damage occurs progressively. You must have noticed at home that the most faded folds of curtains are the first to (4)\_\_\_\_\_ and fall apart. Fading of colours and alterations of hues are the (5)\_\_\_\_\_ easy-to-detect signs of light damage.

**SubQuestion No : 17****Q.17** Select the most appropriate option to fill in blank number 2.

- Ans  1. mortification  
 2. degradation  
 3. embarrassment  
 4. disgrace

[www.shikarat.com](http://www.shikarat.com)

Question ID : 26433098990

Status : Answered

Chosen Option : 4

**Comprehension:**

In the following passage, some words have been deleted. Read the passage carefully and select the most appropriate option to fill in each blank.

One of the greatest (1)\_\_\_\_\_ to textiles is light. It is a form of energy that can fade colour and cause chemical and physical (2)\_\_\_\_\_ of textile fibres. Exposure to both, natural and ultra violet light can threaten the (3)\_\_\_\_\_ of textiles. Light damage occurs progressively. You must have noticed at home that the most faded folds of curtains are the first to (4)\_\_\_\_\_ and fall apart. Fading of colours and alterations of hues are the (5)\_\_\_\_\_ easy-to-detect signs of light damage.

**SubQuestion No : 18****Q.18** Select the most appropriate option to fill in blank number 3.

- Ans  1. dexterity  
 2. longevity  
 3. oldness  
 4. seniority

Question ID : 26433098991

Status : Answered

Chosen Option : 1

**Comprehension:**

In the following passage, some words have been deleted. Read the passage carefully and select the most appropriate option to fill in each blank.

One of the greatest (1)\_\_\_\_\_ to textiles is light. It is a form of energy that can fade colour and cause chemical and physical (2)\_\_\_\_\_ of textile fibres. Exposure to both, natural and ultra violet light can threaten the (3)\_\_\_\_\_ of textiles. Light damage occurs progressively. You must have noticed at home that the most faded folds of curtains are the first to (4)\_\_\_\_\_ and fall apart. Fading of colours and alterations of hues are the (5)\_\_\_\_\_ easy-to-detect signs of light damage.

**SubQuestion No : 19**

**Q.19** Select the most appropriate option to fill in blank number 4.

- Ans  1. distill  
 2. shred  
 3. desolate  
 4. irate

Question ID : 26433098992

Status : Not Answered

Chosen Option : --

**Comprehension:**

In the following passage, some words have been deleted. Read the passage carefully and select the most appropriate option to fill in each blank.

One of the greatest (1)\_\_\_\_\_ to textiles is light. It is a form of energy that can fade colour and cause chemical and physical (2)\_\_\_\_\_ of textile fibres. Exposure to both, natural and ultra violet light can threaten the (3)\_\_\_\_\_ of textiles. Light damage occurs progressively. You must have noticed at home that the most faded folds of curtains are the first to (4)\_\_\_\_\_ and fall apart. Fading of colours and alterations of hues are the (5)\_\_\_\_\_ easy-to-detect signs of light damage.

**SubQuestion No : 20**

**Q.20** Select the most appropriate option to fill in blank number 5.

- Ans  1. premature  
 2. prompt  
 3. earliest  
 4. former

www.shikarat.com

Question ID : 26433098993

Status : Answered

Chosen Option : 3

**Section : Part-D-Hindi**

**Q.1** 'आँखों में \_\_\_\_\_ माला घिर आना।'

उपरोक्त मुहावरे में रिक्त स्थान की पूर्ति उचित शब्द द्वारा कीजिए।

- Ans  1. पुष्प  
 2. मोती  
 3. फूल  
 4. मेघ

Question ID : 26433069688

Status : Not Answered

Chosen Option : --

Q.2 निम्नलिखित विकल्पों में से प्रश्नवाचक सर्वनाम का कौन सा एक शुद्ध वाक्य नहीं है?

- Ans
- 1. द्विवेदी जी का मकान कौनसा है?
  - 2. क्या यह पत्र अपने प्राचार्य को देना है?
  - 3. यह कौन- सी भाषा है?
  - 4. इस थैले में क्या है?

Question ID : 26433091238

Status : Not Answered

Chosen Option : --

Q.3 निम्नलिखित विकल्पों में से कौन सा एक वाक्य संकेतवाचक सर्वनाम का नहीं है?

- Ans
- 1. वह आदमी एक विदेशी जासूस है।
  - 2. यह लड़का इस कक्षा का मॉनीटर है।
  - 3. ये मेरी पुस्तकें हैं।
  - 4. नदी में पानी नहीं है।

Question ID : 26433091242

Status : Not Answered

Chosen Option : --

Q.4 निम्नलिखित वाक्यों में से शुद्ध वाक्य का चयन कीजिए।

- Ans
- 1. काम इस में होना देर स्वभाविक था।
  - 2. इस काम में देरी होनी स्वाभाविक थी।
  - 3. इस काम में देर होनी स्वभाविक था।
  - 4. इस काम को देर होना स्वभाविक थी।

www.shikarat.com

Question ID : 26433091313

Status : Not Answered

Chosen Option : --

Q.5 'मैं रविवार के दिन तुम्हारे घर आऊंगा।' वाक्य में रेखांकित वाक्य-खंड के स्थान पर उचित वाक्य-खंड या शब्द का प्रयोग करें।

- Ans
- 1. में
  - 2. के
  - 3. या
  - 4. को

Question ID : 26433062199

Status : Not Answered

Chosen Option : --

Q.6 'जो इतिहास से संबंध रखता है' वाक्यांश के लिए एक शब्द, \_\_\_\_\_ है।

- Ans
- 1. ऐतिहासिक
  - 2. इतिहासकार
  - 3. खगोलिक
  - 4. भौगोलिक

Question ID : 26433062943

Status : Not Answered

Chosen Option : --

Q.7 निम्नलिखित वाक्य में रेखांकित खंड के स्थान पर प्रयुक्त होने वाले सबसे उपयुक्त विकल्प का चयन कीजिए।  
बच्चों को काटकर आम खिलाओ।

- Ans
- 1. आम काट
  - 2. काट आम
  - 3. काटकर
  - 4. आम काटकर

Question ID : 26433079574  
Status : Not Answered  
Chosen Option : --

Q.8 निम्न में से कौन-सा समूह 'गंगा' शब्द का पर्यायवाची समूह नहीं है?

- Ans
- 1. सुरसरि, त्रिपथगा
  - 2. त्रिपथगा, सूर्यजा
  - 3. जाह्नवी, सुरसरि
  - 4. भागीरथी, सुरसरि

Question ID : 26433067076  
Status : Not Answered  
Chosen Option : --

Q.9 ' \_\_\_\_\_ घोड़े पर सवार होना।' उपरोक्त मुहावरे में रिक्त स्थान की पूर्ति उचित शब्द द्वारा कीजिए।

- Ans
- 1. बातों के
  - 2. तेजी के
  - 3. पानी के
  - 4. हवा के

www.shikarat.com

Question ID : 26433069693  
Status : Not Answered  
Chosen Option : --

Q.10 "चारों ओर रात्रि का घोर अँधेरा छाया था।" उक्त वाक्य में प्रयुक्त 'घोर' के स्थान पर उसके उचित समानार्थी शब्द का प्रयोग निम्न में से किस वाक्य में किया गया है?

- Ans
- 1. चारों ओर रात्रि का घनिष्ठ अँधेरा छाया था।
  - 2. चारों ओर रात्रि का घमासान अँधेरा छाया था।
  - 3. चारों ओर रात्रि का गहरा अँधेरा छाया था।
  - 4. चारों ओर रात्रि का भयंकर अँधेरा छाया था।

Question ID : 26433085148  
Status : Not Answered  
Chosen Option : --



Q.11 निम्न में से कौन-सा शब्द 'पयोद' शब्द का पर्यायवाची शब्द है?

- Ans
- 1. सहचर
  - 2. मलीन
  - 3. बारिश
  - 4. जलधर

Question ID : 26433067082

Status : Not Answered

Chosen Option : --

Q.12 "नमन का आरोग्य अच्छा है।"

उक्त वाक्य में प्रयुक्त 'आरोग्य' के स्थान पर उसके समानार्थी शब्द का प्रयोग निम्न में से किस वाक्य में नहीं किया गया है?

- Ans
- 1. नमन का स्वास्थ्य अच्छा है।
  - 2. नमन अस्वस्थ है।
  - 3. नमन तंदुरुस्त है।
  - 4. नमन की सेहत अच्छी है।

Question ID : 26433085150

Status : Not Answered

Chosen Option : --

Q.13 'दस रुपया में क्या आता है?' इस वाक्य में प्रयुक्त कौन सा शब्द अशुद्ध है?

- Ans
- 1. रुपया
  - 2. दस
  - 3. आता
  - 4. क्या

www.shikarat.com

Question ID : 26433066801

Status : Not Answered

Chosen Option : --

Q.14 निम्नलिखित में से शुद्ध वाक्य का चयन कीजिए।

- Ans
- 1. सीमा को पांच बहने हैं।
  - 2. बहनें पांच है सीमा।
  - 3. सीमा बहनें हैं पांच।
  - 4. सीमा की पांच बहनें हैं।

Question ID : 26433091311

Status : Not Answered

Chosen Option : --

Q.15 नीचे दिए गए वाक्य के अशुद्ध भाग का चयन कीजिए।

'रमेश को उस समय मुझसे बेफिजूल की बातें नहीं करनी चाहिए थीं।'

- Ans
- 1. नहीं करनी चाहिए थीं।
  - 2. रमेश को
  - 3. बेफिजूल की बातें
  - 4. उस समय मुझसे

Question ID : 26433085085

Status : Not Answered

Chosen Option : --

**Comprehension:**

दिए गए गद्यांश के अनुसार प्रश्न संख्या 1-5 के उत्तर दीजिए।

भारतवर्ष ने कभी भी भौतिक वस्तुओं के (1) \_\_\_\_\_ को बहुत अधिक महत्त्व नहीं दिया है। उसकी दृष्टि से मनुष्य के भीतर जो महान (2) \_\_\_\_\_ गुण स्थिर भाव से बैठा हुआ है, वही चरम और परम है। लोभ-मोह, काम-क्रोध आदि विचार मनुष्य में (3) \_\_\_\_\_ रूप से विद्यमान रहते हैं, पर उन्हें प्रधान शक्ति मान लेना और अपने मन तथा बुद्धि को उन्हीं के इशारे पर छोड़ देना बहुत बुरा (4) \_\_\_\_\_ है। भारतवर्ष ने कभी भी उन्हें उचित नहीं माना, उन्हें सदा (5) \_\_\_\_\_ के बंधन से बाँधकर रखने का प्रयत्न किया है।

**SubQuestion No : 16**

Q.16 दिए गए शब्दों में से उचित शब्द चुनकर रिक्त स्थान (1) की पूर्ति कीजिए।

- Ans  1. संग्रह  
 2. प्रयोग  
 3. लाभ  
 4. विग्रह

Question ID : 26433094115

Status : Not Answered

Chosen Option : --

**Comprehension:**

दिए गए गद्यांश के अनुसार प्रश्न संख्या 1-5 के उत्तर दीजिए।

भारतवर्ष ने कभी भी भौतिक वस्तुओं के (1) \_\_\_\_\_ को बहुत अधिक महत्त्व नहीं दिया है। उसकी दृष्टि से मनुष्य के भीतर जो महान (2) \_\_\_\_\_ गुण स्थिर भाव से बैठा हुआ है, वही चरम और परम है। लोभ-मोह, काम-क्रोध आदि विचार मनुष्य में (3) \_\_\_\_\_ रूप से विद्यमान रहते हैं, पर उन्हें प्रधान शक्ति मान लेना और अपने मन तथा बुद्धि को उन्हीं के इशारे पर छोड़ देना बहुत बुरा (4) \_\_\_\_\_ है। भारतवर्ष ने कभी भी उन्हें उचित नहीं माना, उन्हें सदा (5) \_\_\_\_\_ के बंधन से बाँधकर रखने का प्रयत्न किया है।

**SubQuestion No : 17**

Q.17 दिए गए शब्दों में से उचित शब्द चुनकर रिक्त स्थान (2) की पूर्ति कीजिए।

- Ans  1. बाह्य  
 2. विशेष  
 3. महत्त्वपूर्ण  
 4. आंतरिक

www.shikarat.com

Question ID : 26433094116

Status : Not Answered

Chosen Option : --

**Comprehension:**

दिए गए गद्यांश के अनुसार प्रश्न संख्या 1-5 के उत्तर दीजिए।

भारतवर्ष ने कभी भी भौतिक वस्तुओं के (1) \_\_\_\_\_ को बहुत अधिक महत्त्व नहीं दिया है। उसकी दृष्टि से मनुष्य के भीतर जो महान (2) \_\_\_\_\_ गुण स्थिर भाव से बैठा हुआ है, वही चरम और परम है। लोभ-मोह, काम-क्रोध आदि विचार मनुष्य में (3) \_\_\_\_\_ रूप से विद्यमान रहते हैं, पर उन्हें प्रधान शक्ति मान लेना और अपने मन तथा बुद्धि को उन्हीं के इशारे पर छोड़ देना बहुत बुरा (4) \_\_\_\_\_ है। भारतवर्ष ने कभी भी उन्हें उचित नहीं माना, उन्हें सदा (5) \_\_\_\_\_ के बंधन से बाँधकर रखने का प्रयत्न किया है।

**SubQuestion No : 18**

Q.18 दिए गए शब्दों में से उचित शब्द चुनकर रिक्त स्थान (3) की पूर्ति कीजिए।

- Ans  1. अनिवार्य  
 2. विशेष  
 3. ऐच्छिक  
 4. स्वाभाविक

Question ID : 26433094117

Status : Not Answered

Chosen Option : --

**Comprehension:**

दिए गए गद्यांश के अनुसार प्रश्न संख्या 1-5 के उत्तर दीजिए।

भारतवर्ष ने कभी भी भौतिक वस्तुओं के (1) \_\_\_\_\_ को बहुत अधिक महत्त्व नहीं दिया है। उसकी दृष्टि से मनुष्य के भीतर जो महान (2) \_\_\_\_\_ गुण स्थिर भाव से बैठा हुआ है, वही चरम और परम है। लोभ-मोह, काम-क्रोध आदि विचार मनुष्य में (3) \_\_\_\_\_ रूप से विद्यमान रहते हैं, पर उन्हें प्रधान शक्ति मान लेना और अपने मन तथा बुद्धि को उन्हीं के इशारे पर छोड़ देना बहुत बुरा (4) \_\_\_\_\_ है। भारतवर्ष ने कभी भी उन्हें उचित नहीं माना, उन्हें सदा (5) \_\_\_\_\_ के बंधन से बाँधकर रखने का प्रयत्न किया है।

**SubQuestion No : 19**

Q.19 दिए गए शब्दों में से उचित शब्द चुनकर रिक्त स्थान (4) की पूर्ति कीजिए।

- Ans  1. आचरण  
 2. प्रणाली  
 3. तरीका  
 4. कार्य

Question ID : 26433094118

Status : Not Answered

Chosen Option : --

**Comprehension:**

दिए गए गद्यांश के अनुसार प्रश्न संख्या 1-5 के उत्तर दीजिए।

भारतवर्ष ने कभी भी भौतिक वस्तुओं के (1) \_\_\_\_\_ को बहुत अधिक महत्त्व नहीं दिया है। उसकी दृष्टि से मनुष्य के भीतर जो महान (2) \_\_\_\_\_ गुण स्थिर भाव से बैठा हुआ है, वही चरम और परम है। लोभ-मोह, काम-क्रोध आदि विचार मनुष्य में (3) \_\_\_\_\_ रूप से विद्यमान रहते हैं, पर उन्हें प्रधान शक्ति मान लेना और अपने मन तथा बुद्धि को उन्हीं के इशारे पर छोड़ देना बहुत बुरा (4) \_\_\_\_\_ है। भारतवर्ष ने कभी भी उन्हें उचित नहीं माना, उन्हें सदा (5) \_\_\_\_\_ के बंधन से बाँधकर रखने का प्रयत्न किया है।

**SubQuestion No : 20**

Q.20 दिए गए शब्दों में से उचित शब्द चुनकर रिक्त स्थान (5) की पूर्ति कीजिए।

- Ans  1. बेड़ियों  
 2. मोह  
 3. संयम  
 4. रिश्तों

www.shikarat.com

Question ID : 26433094119

Status : Not Answered

Chosen Option : --