

Combined Graduate Level Examination Tier I 2022

Roll Number	90[REDACTED]23
Candidate Name	[REDACTED]
Venue Name	iON Digital Zone iDZ Airport Road
Exam Date	09/12/2022
Exam Time	11:45 AM - 12:45 PM
Subject	Combined Graduate Level Examination Tier I 2022

SHIKARAT.COM
Online Education

Section : General Intelligence and Reasoning

Q.1 A series is given with one term missing. Select the correct alternative from the given ones that will complete the series.
NMR, QFZ, TYH, WRP, ?

- Ans
- 1. ZAM
 - 2. ZRS
 - 3. ZKX
 - 4. ZXY

www.shikarat.com

Question ID : 264330104794
Status : Not Answered
Chosen Option : --

Q.2 Select the option that represents the correct order of the given words as they would appear in an English dictionary.

- 1- Perpend
- 2- Perplex
- 3- Pernicious
- 4- Perpetrate
- 5- Perpetual

- Ans
- 1. 3, 1, 5, 4, 2
 - 2. 3, 1, 4, 5, 2
 - 3. 1, 3, 5, 4, 2
 - 4. 1, 3, 4, 5, 2

SHIKARAT.COM
Online Education

Question ID : 26433079441
Status : Not Answered
Chosen Option : --

Q.3 Select the set in which the numbers are related in the same way as are the numbers of the following set.

(NOTE: Operations should be performed on the whole numbers, without breaking down the numbers into its constituent digits. E.g., 13 – Operations on 13 such as adding /subtracting /multiplying etc. to 13 can be performed. Breaking down 13 into 1 and 3 and then performing mathematical operations on 1 and 3 is NOT allowed).

(56, 22, 26)
(34, 20, 18)

- Ans
- 1. (58, 16, 21)
 - 2. (45, 12, 33)
 - 3. (78, 54, 44)
 - 4. (23, 8, 10)

Question ID : 26433074776
Status : Not Answered
Chosen Option : --

Q.4 If $A \times B$ means that A is the mother of B, $A - B$ means that A is the father of B, $A \div B$ means that A is the sister of B, then which of the following expression shows that P is the paternal grandmother of R?

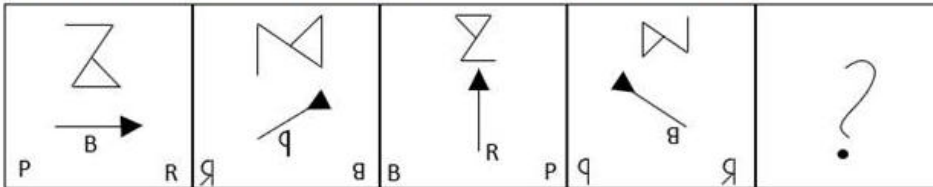
- Ans
- 1. $P \times Q \div R$
 - 2. $Q \times P - R$
 - 3. $P \div R - Q$
 - 4. $P \times Q - R$

Question ID : 264330104960

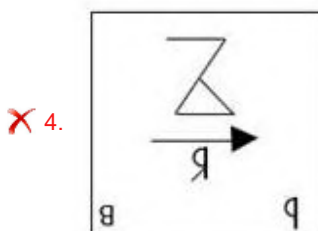
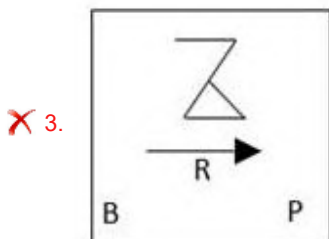
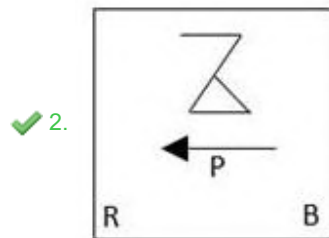
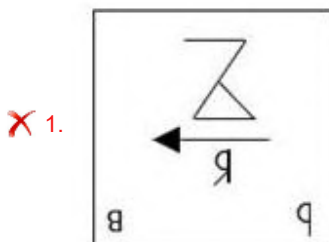
Status : Not Answered

Chosen Option : --

Q.5 Select the figure that will come next in the following figure series.



Ans



www.shikarat.com

Question ID : 26433068472

Status : Answered

Chosen Option : 2

Q.6 Select the correct mirror image of the given figure when the mirror is placed at MN as shown below.

P N e 3 2 Y C A
M ————— N

- Ans
- ✓ 1. P N e 3 2 Y C A
 - ✗ 2. P N e 3 2 Y C A
 - ✗ 3. P N e 3 2 Y C A
 - ✗ 4. P N e 3 2 Y C A

Question ID : 26433080794

Status : Answered

Chosen Option : 1

Q.7 Select the odd group of numbers. (NOTE: Operations should be performed on the whole numbers, without breaking down the numbers into its constituent digits. E.g.13 – Operations on 13 such as adding /subtracting /multiplying etc. to 13 can be performed. Breaking down 13 into 1 and 3 and then performing mathematical operations on 1 and 3 is not allowed)

- Ans
- ✗ 1. (137 – 142 – 147)
 - ✗ 2. (103 – 108 – 113)
 - ✓ 3. (117 – 122 – 129)
 - ✗ 4. (131 – 136 – 141)

Question ID : 264330105079

Status : Not Answered

Chosen Option : --

Q.8 Select the option that is related to the third word in the same way as the second word is related to the first word. (The words must be considered as meaningful English words and must not be related to each other based on the number of letters/number of consonants/vowels in the word)
Dentist : Teeth :: Dermatologist : ?

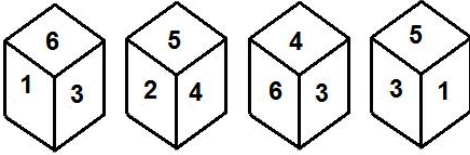
- Ans
- ✗ 1. Bones
 - ✗ 2. Blood vessels
 - ✗ 3. Blood
 - ✓ 4. Skin

Question ID : 26433067803

Status : Answered

Chosen Option : 2

Q.9 Four different positions of the same dice are shown, the six faces of which are numbered 1 to 6. Select the number that will be on the face opposite to the one showing '3'.



- Ans
- 1. 1
 - 2. 2
 - 3. 5
 - 4. 6

Question ID : 26433078865

Status : **Not Attempted and Marked For Review**

Chosen Option : --

Q.10 Select the option that is related to the third word in the same way as the second word is related to the first word.
(The words must be considered as meaningful English words and must not be related to each other based on the number of letters/number of consonants/vowels in the word.)

Horse : Stable :: Hen : ?

- Ans
- 1. Pen
 - 2. Coop
 - 3. Farm
 - 4. Shed

Question ID : 26433056815

Status : **Answered**

Chosen Option : 3

Q.11 In the following question below are given some statements followed by some conclusions based on those statements. Taking the given statements to be true even if they seem to be at variance from commonly known facts. Read all the conclusions and then decide which of the given conclusion logically follows the given statements.

Statements:

I. All A are M.

II. No M is B.

Conclusion:

I. Some M are A.

II. Some B are M.

III. Some A are B.

- Ans
- 1. Only conclusion I follows
 - 2. Both conclusions II and III follows
 - 3. Both conclusions I and III follows
 - 4. Only conclusion II follows

Question ID : 264330104938

Status : **Answered**

Chosen Option : 2

Q.12 Which letter cluster will replace the question mark (?) to complete the given series?
CBOM, FCQN, ?, LEUP, OFWQ

- Ans
- 1. IDTO
 - 2. IDSP
 - 3. HDSO
 - 4. IDSO

Question ID : 26433059857
Status : Not Answered
Chosen Option : --

Q.13 In a certain code language, 'SHIRTS' is written as 'LKVVWU' and 'KURTAS' is written as 'UXNVDW'. How will 'FABRIC' be written in that language?

- Ans
- 1. EDIFLU
 - 2. DEIGLV
 - 3. EELBLU
 - 4. EDIGLU

Question ID : 26433065622
Status : Not Answered
Chosen Option : --

Q.14 Which two signs and two numbers should be interchanged in the following equation to make it correct?

$$60 \times 3 + 660 \div 6 - 20 = 290$$

- Ans
- 1. 20 and 6, + and -
 - 2. 20 and 60, + and \times
 - 3. 6 and 660, \times and \div
 - 4. 20 and 660, + and \div

Question ID : 26433096018
Status : Not Answered
Chosen Option : --

Q.15 Which number will replace the question mark (?) in the following series?
3, 13, 53, 213, ?, 3413

- Ans
- 1. 753
 - 2. 953
 - 3. 1053
 - 4. 853

www.shikarat.com

Question ID : 26433067596
Status : Not Answered
Chosen Option : --

Q.16 In a certain code language, 'ADAPTATION' is written as 'DAPAATITNO', 'SKATEBOARD' is written as 'KSTABEAODR'. How will 'LIGHTBOARD' be written in that language?

- Ans
- 1. ILHGBTAODR
 - 2. ILHGTBAODR
 - 3. ILHGBATODR
 - 4. ILHGBTOADR

Question ID : 26433068237
Status : Not Answered
Chosen Option : --

www.shikarat.com

Q.17 Three of the following letter-clusters are alike in some manner and hence form a group. Which letter-cluster does not belong to that group?


- Ans
- 1. URWQ
 - 2. EQGP
 - 3. XFWE
 - 4. MKOJ

Question ID : 26433080459

Status : Not Answered

Chosen Option : --

Q.18 Select the option figure in which the given figure (X) is embedded as its part (rotation is NOT allowed).



Ans

- 1.
- 2.
- 3.
- 4.

Question ID : 26433069163

Status : Answered

Chosen Option : 2

Q.19 A & B means 'A is the wife of B'
A # B means 'A is the sister of B'
A @ B means 'A is the husband of B'
A % B means 'A is the father of B'
If S & T % R @ P # Q , then how is S related to P?

- Ans
- 1. Mother
 - 2. Wife
 - 3. Sister
 - 4. Mother-in-law

Question ID : 26433065965

Status : Not Attempted and
Marked For Review

Chosen Option : --

Q.20 Which two signs should be interchanged to make the given equation correct?
 $81 + 3 \div 9 * 5 - 12 = 60$

- Ans
- 1. + and -
 - 2. + and +
 - 3. + and -
 - 4. + and *

Question ID : 26433067844

Status : Not Answered

Chosen Option : --

Q.21 By interchanging the given two signs and numbers which of the following equation will be not correct?

+ and ×, 5 and 4

I. $4 + 8 \times 5 - 7 \div 1 = 37$

II. $5 \times 3 - 4 + 6 \div 2 = -8$

- Ans
- 1. Only I
 - 2. Both I and II
 - 3. Neither I nor II
 - 4. Only II

Question ID : 264330105144

Status : Not Answered

Chosen Option : --

Q.22 Select the set in which the numbers are related in the same way as are the numbers of the following sets.

(NOTE : Operations should be performed on the whole numbers, without breaking down the numbers into its constituent digits. E.g. 13 – Operations on 13 such as adding / subtracting / multiplying etc. to 13 can be performed. Breaking down 13 into 1 and 3 and then performing mathematical operations on 1 and 3 is NOT allowed)

(76, 75, 1)

(90, 87, 9)

- Ans
- 1. (56, 48, 64)
 - 2. (87, 56, 900)
 - 3. (16, 4, 57)
 - 4. (100, 85, 125)

Question ID : 26433079130

Status : Not Answered

Chosen Option : --

Q.23 Select the set in which the numbers are related in the same way as are the numbers of the following set.

(NOTE: Operations should be performed on the whole numbers, without breaking down the numbers into its constituent digits.)

(21, 225, 9)

(12, 49, 2)

Ans 1. (13, 81, 6)

2. (14, 64, 2)

3. (11, 18, 7)

4. (15, 54, 3)

Question ID : 26433069229

Status : Not Answered

Chosen Option : --

Q.24 Three Statements are given followed by Three conclusions numbered I, II and III. Assuming the statements to be true, even if they seem to be at variance with commonly known facts, decide which of the conclusions logically follow(s) from the statements.

Statements:

Some clowns are artists.

All artists are smart.

All smarts are rich.

Conclusions:

I. All artists are rich.

II. Some clowns are smart.

III. All clowns are artists.

Ans 1. All conclusions follow.

2. Both conclusions I and II follow.

3. Both conclusions II and III follow.

4. Both conclusions I and III follow.

Question ID : 26433074641

Status : Answered

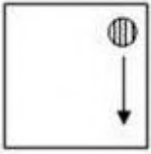
Chosen Option : 2

Q.25 Select the figure that will come next in the following series.




Ans


1.




2.



3.



4.



www.shikarat.com

Question ID : 26433078978

Status : Answered

Chosen Option : 3

Section : General Awareness

Q.1 Buckminsterfullerene is a nanoparticle characterised by spherical geometry and a hollow interior which contains how many carbon atoms?

Ans 1. 70

2. 40

3. 50

4. 60

Question ID : 26433064069

Status : Answered

Chosen Option : 4

Q.2 Which of the following is NOT mentioned in the Indian Constitution as a Fundamental Duty?

Ans 1. To safeguard public property

2. To respect elders

3. To defend the country

4. To promote harmony

Question ID : 26433086786

Status : Answered

Chosen Option : 2

Q.3 Which of the following is known as ammonia?

- Ans
- 1. NO₃
 - 2. NH₃
 - 3. PH₃
 - 4. NO₂

Question ID : 26433066461
Status : Answered
Chosen Option : 2

Q.4 _____ is the fundamental structural unit of living organisms.

- Ans
- 1. Organ
 - 2. Tissue
 - 3. Organ system
 - 4. Cell

Question ID : 264330105449
Status : Answered
Chosen Option : 4

Q.5 Which of the following is a festival of merriment and heralds the Assamese New Year and the onset of spring?

- Ans
- 1. Me-Dum-Me-Phi
 - 2. Ali-ai-ligang
 - 3. Bohag Bihu
 - 4. Kati Bihu

Question ID : 26433070822
Status : Answered
Chosen Option : 1

Q.6 Kumkum Mohanty, an Odissi dancer received which of the following awards in 2005?

- Ans
- 1. Padma Bhushan
 - 2. Kalidas Samman
 - 3. Padma Vibhushan
 - 4. Padma Shri

Question ID : 26433090710
Status : Answered
Chosen Option : 1

Q.7 Sharodi Saikia is an exponent of which Indian classical dance form?

- Ans
- 1. Kathak
 - 2. Bharatanatyam
 - 3. Kuchipudi
 - 4. Sattriya

Question ID : 26433054325
Status : Answered
Chosen Option : 4

Q.8 Which of the following territories to the south and north were made part of the Chola kingdom by the successors of the ruler Vijayalaya?

- Ans
- 1. Rashtrakuta and Chera
 - 2. Pandyan and Pallava
 - 3. Vakataka and Satvahana
 - 4. Pallava and Chera

Question ID : 264330105418
Status : Answered
Chosen Option : 4

Q.9 Which of the following commissions recommended that "the appointment of Governor should be non-partisan"?

- Ans
- 1. Fazal Ali Commission
 - 2. Rajmanner commission
 - 3. Mandal commission
 - 4. Sarkaria commission

Question ID : 26433064843
Status : Answered
Chosen Option : 4

Q.10 The T-20 Cricket World Cup for women was held in which country in 2020?

- Ans
- 1. West Indies
 - 2. India
 - 3. United Kingdom
 - 4. Australia

Question ID : 26433070833
Status : Answered
Chosen Option : 4

Q.11 The first session of All India Depressed Classes congress was held at _____ in 1930.

- Ans
- 1. Delhi
 - 2. Surat
 - 3. Kanpur
 - 4. Nagpur

Question ID : 26433085284
Status : Answered
Chosen Option : 3

Q.12 The lava plateaus are rich in which kind of soil?

- Ans
- 1. Black soil
 - 2. Alluvial soil
 - 3. Red soil
 - 4. Laterite soil

Question ID : 264330105629
Status : Answered
Chosen Option : 4

Q.13 The Ennum Ezhuthum scheme was launched by the Tamil Nadu government to ensure foundational Literacy and Numeracy by 2025. This scheme was launched to bridge the learning gap among students aged _____.

- Ans
- 1. between 10 and 15
 - 2. between 6 and 10
 - 3. under 8
 - 4. under 5

Question ID : 264330105349
Status : Answered
Chosen Option : 1

Q.14 Which act allows the government to confiscate the assets of newspaper in case of publishing anything "objectionable"?

- Ans
- 1. Vernacular Press Act, 1878
 - 2. Ilbert Act, 1883
 - 3. Media Act, 1883
 - 4. Newspaper Act, 1855

Question ID : 264330105564
Status : Answered
Chosen Option : 2

Q.15 Ashoka appointed _____ to solve the social problems in his region.

- Ans
- 1. amatya
 - 2. nyayadheesh
 - 3. samaharta
 - 4. dhamma mahamatta

Question ID : 264330105175
Status : Answered
Chosen Option : 4

Q.16 Total deposits with Post Office savings organisations are included in which money supply aggregate?

- Ans
- 1. M1
 - 2. M2
 - 3. M3
 - 4. M4

Question ID : 264330105382
Status : Answered
Chosen Option : 1

Q.17 _____ unemployment occurs with changes in economic activity over the business cycle.

- Ans
- 1. Structural
 - 2. Cyclical
 - 3. Frictional
 - 4. Technological

Question ID : 264330105522
Status : Answered
Chosen Option : 2

Q.18 Who among the following received the MS Subbulakshmi Award from the Tamil Nadu Eyal Isai Nataka Manram for the year 2020?

- Ans
- 1. Saindhavi
 - 2. Vani Jairam
 - 3. Harini
 - 4. L.R.Eswari

Question ID : 26433054479
Status : Answered
Chosen Option : 2

Q.19 A good proportion of the _____ produced during the green revolution period (available as marketed surplus) was sold by the farmers in the market.

- Ans
- 1. Wheat and maize
 - 2. Rice and gram
 - 3. Wheat and gram
 - 4. Wheat and rice

Question ID : 26433065457
Status : Answered
Chosen Option : 4

Q.20 Which of the following rivers flow through a rift valley?

- Ans
- 1. Luni
 - 2. Koshi
 - 3. Son
 - 4. Tapi

Question ID : 26433066517
Status : Answered
Chosen Option : 3

Q.21 Police of which State/UT launched the Anubhuti-QR Code-based feedback system in February 2022?

- Ans
- 1. Goa
 - 2. Madhya Pradesh
 - 3. Delhi
 - 4. Maharashtra

Question ID : 264330105209
Status : Answered
Chosen Option : 2

Q.22 Which of the following cities did not hosted matches of FIFA U-17 Women's World Cup 2022 in India?

- Ans
- 1. Bhubaneswar
 - 2. Navi Mumbai
 - 3. New Delhi
 - 4. Goa

Question ID : 26433064283
Status : Answered
Chosen Option : 1

Q.23 India's first high-speed rail line is being constructed between (as of February 2022):

- Ans
- 1. Delhi-Meerut
 - 2. Delhi-Mumbai
 - 3. Mumbai-Ahmedabad
 - 4. Mumbai-Pune

Question ID : 26433092872
Status : Answered
Chosen Option : 2

Q.24 In August 2022, Uttarakhand Chief Minister named which cricketer as the brand ambassador of the state?

- Ans
- 1. Rishabh Pant
 - 2. Virat Kohli
 - 3. Hardik Pandya
 - 4. Yuvraj Singh

Question ID : 264330105344
Status : Answered
Chosen Option : 4

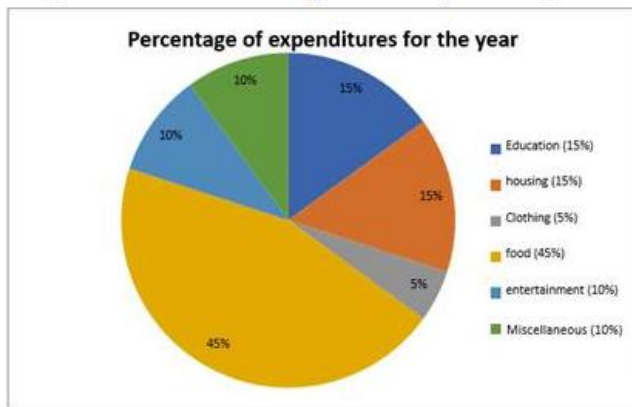
Q.25 The pH of a neutral solution is _____.

- Ans
- 1. 0
 - 2. 7
 - 3. 8
 - 4. 14

Question ID : 264330105480
Status : Answered
Chosen Option : 2

Section : Quantitative Aptitude

Q.1 Study the given pie-chart and answer the question that follows.
The pie-chart shows the expenditure by a family on different heads.



The angle formed by the sector representing education at the centre of the circle is:

- Ans
- 1. 45°
 - 2. 60°
 - 3. 67°
 - 4. 54°

Question ID : 26433076114
Status : Answered
Chosen Option : 1

Q.2 What is the present value of Rs.10,000 received in 2 years, if the interest rate is 12% per year discounted semi-annually?

- Ans
- 1. Rs.7,920.94
 - 2. Rs.7,900.94
 - 3. Rs.7,020.94
 - 4. Rs.7,920.90

Question ID : 26433092173
Status : Not Answered
Chosen Option : --

Q.3 Two angles of a triangle are equal and the third angle measures 78° . What is the measure of each of the unknown angles?

- Ans
- 1. 49°
 - 2. 52°
 - 3. 50°
 - 4. 51°

Question ID : 26433066370
Status : Answered
Chosen Option : 4

Q.4 If $\frac{\sin \theta + \cos \theta}{\sin \theta - \cos \theta} = \frac{3}{2}$, then the value of $\sin^4 \theta - \cos^4 \theta$ is:

- Ans
- 1. $\frac{5}{12}$
 - 2. $\frac{5}{13}$
 - 3. $\frac{11}{12}$
 - 4. $\frac{12}{13}$

Question ID : 26433061105
Status : Not Answered
Chosen Option : --

Q.5 If $\tan A = \frac{2}{3}$, then find $\sin A$.

- Ans
- 1. $\frac{2}{\sqrt{13}}$
 - 2. $\frac{1}{3}$
 - 3. $\frac{2}{3}$
 - 4. $\frac{3}{\sqrt{13}}$

Question ID : 26433057164
Status : Not Answered
Chosen Option : --

Q.6 20 men can finish a work in 220 days, but at the end of 90 days, 20 additional men are employed. In how many more days will the work be completed?

- Ans
- 1. 50
 - 2. 65
 - 3. 55
 - 4. 60

Question ID : 26433073094
Status : Not Answered
Chosen Option : --

Q.7 The length of the side of a cube is 2.8 cm. What is the volume of the largest sphere that can be taken out of the cube?

- Ans
- 1. 11.50 cm^3
 - 2. 11.55 cm^3
 - 3. 1.15 cm^3
 - 4. 115 cm^3

Question ID : 264330105882
Status : Not Answered
Chosen Option : --

Q.8 Triangle ABC and DEF are similar. If AB = 92 cm, BC = 48 cm, AC = 120 cm, and the length of the smallest side of DEF is 200 cm, then find the length of the longest side of triangle DEF?

- Ans
- 1. 350 cm
 - 2. 400 cm
 - 3. 500 cm
 - 4. 225 cm

Question ID : 26433075962

Status : Not Answered

Chosen Option : --

Q.9 A shopkeeper offers a cash discount of ₹ 85 first and then two successive discounts of 10% and 2% on the marked price of a fan. If the marked price of the fan is ₹ 1,285, what is its selling price (in ₹)?

- Ans
- 1. 1058.4
 - 2. 1100
 - 3. 1000.4
 - 4. 958.4

Question ID : 26433075551

Status : Not Answered

Chosen Option : --

Q.10 If $36 : 81 :: X : 63$, what is the value of X?

- Ans
- 1. 28
 - 2. 30
 - 3. 31
 - 4. 29

Question ID : 26433066362

Status : Not Answered

Chosen Option : --

Q.11 If $\cos(A - B) = \frac{\sqrt{3}}{2}$, and $\cos(A + B) = 0$, where A and B are positive acute angles and $A \geq B$, then the measures of A and B are:

- Ans
- 1. 60° and 30°
 - 2. 70° and 20°
 - 3. 50° and 40°
 - 4. 80° and 10°

Question ID : 26433083015

Status : Not Answered

Chosen Option : --

Q.12 If $x^2 + \frac{1}{x^2} = 66$, the value of $x - \frac{1}{x}$ is _____.

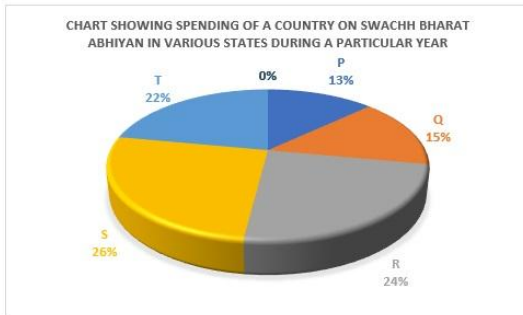
- Ans
- 1. 8
 - 2. 10
 - 3. 9
 - 4. 6

Question ID : 26433066404

Status : Not Answered

Chosen Option : --

Q.13 The following pie chart shows the spending of a country on Swachh Bharat Abhiyan in various states during a particular year. Total spending of the country = 1620 crores
Study the pie chart and answer the following question.



How much less money is spent on state P than on state S?

- Ans
- 1. 211.2 crores
 - 2. 210.6 crores
 - 3. 211 crores
 - 4. 205 crores

www.shikarat.com

Question ID : 26433079900

Status : Not Answered

Chosen Option : --

Q.14 A person travels in a car at 40 km/h for 3 hours, on a bike at 30 km/h for 2 hours, and in a train at 80 km/h for 5 hours. What is the average speed at which he travelled?

- Ans
- 1. 56 km/h
 - 2. 60 km/h
 - 3. 62 km/h
 - 4. 58 km/h

Question ID : 26433063920

Status : Not Answered

Chosen Option : --

Q.15 The LCM of 144, 360 and 450 is:

- Ans
- 1. 4800
 - 2. 2400
 - 3. 7200
 - 4. 3600

Question ID : 26433075964

Status : Not Attempted and Marked For Review

Chosen Option : --

www.shikarat.com

Q.16 If the number 123456789 is divided by 9, then the remainder is:

- Ans 1. 0
 2. 1
 3. 3
 4. 2

Question ID : 26433062622

Status : Answered

Chosen Option : 1

Q.17 In a circle of radius 3 cm, two chords of length 2 cm and 3 cm lie on the same side of a diameter. What is the perpendicular distance between the two chords?

- Ans 1. $\frac{4\sqrt{2}-3\sqrt{3}}{2}$ cm
 2. $\frac{4\sqrt{2}-3\sqrt{3}}{4}$ cm
 3. $\frac{4\sqrt{3}-3\sqrt{2}}{2}$ cm
 4. $\frac{4\sqrt{2}-3\sqrt{3}}{3}$ cm

Question ID : 26433066252

Status : Not Answered

Chosen Option : --

Q.18 A conical vessel (solid) is made of iron. Its base radius is 7 cm and height is 15 cm. If the weight of the iron per cubic centimetre is 15 g, what is the weight of the vessel?

- Ans 1. 11.55 kg
 2. 13.55 kg
 3. 12.55 kg
 4. 14.55 kg

Question ID : 26433063906

Status : Not Answered

Chosen Option : --

Q.19 If $k + \frac{1}{k} = 4$, then what is the value of $k^4 + \frac{1}{k^4}$?

- Ans 1. 194
 2. 410
 3. 192
 4. 212

Question ID : 264330105943

Status : Not Answered

Chosen Option : --

Q.20 Menu and Daya travel from point A to B, a distance of 105 km, at speeds of 10 km/h and 25 km/h, respectively. Daya reaches point B first and returns immediately and meets Menu at point C. Find the distance from point A to point C.

- Ans
- 1. 62 km
 - 2. 45 km
 - 3. 60 km
 - 4. 35 km

Question ID : 26433083050
Status : Not Answered
Chosen Option : --

Q.21 If $p + q = 6$ and $pq = 4$, then what is the value of $3(p^3 + q^3)$?

- Ans
- 1. 288
 - 2. 144
 - 3. 512
 - 4. 432

Question ID : 264330105918
Status : Not Answered
Chosen Option : --

Q.22

The ratio of candidates passing and failing within the State.

State	A	B	C
No. of Students (in lakh)	1.50	1.40	1.75

State	Passing : Failing
A	6:5
B	3:4
C	8:2

What is the number of passing students in State B?

- Ans
- 1. 0.4 lakh
 - 2. 0.3 lakh
 - 3. 0.7 lakh
 - 4. 0.6 lakh

Question ID : 26433080386
Status : Answered
Chosen Option : 2

Q.23 The table given below shows the number of officers working in six companies.

Companies	Officers
D	400
E	500
F	600
G	350
H	450
I	800

What is the total number of officers working in all the companies?

- Ans
- 1. 2900
 - 2. 2600
 - 3. 3400
 - 4. 3100

Question ID : 264330105734

Status : Answered

Chosen Option : 4

Q.24 In an election contested between two candidates, 15% of the total voters did not cast their votes and 100 votes got disqualified. The candidate who won the election won it by securing 45% of the total votes and won by a margin of 400 votes. Find the total number of voters?

- Ans
- 1. 3,600
 - 2. 6,000
 - 3. 10,000
 - 4. 3,500

www.shikarat.com

Question ID : 26433075909

Status : Not Answered

Chosen Option : --

Q.25 Sofia sold an iPhone at the cost of Rs.46,068 at a loss of 12%. At what cost will she have to sell it to get a profit of 18%?

- Ans
- 1. Rs.58,350
 - 2. Rs.65,773
 - 3. Rs.52,350
 - 4. Rs.61,773

Question ID : 26433063689

Status : Not Answered

Chosen Option : --

Section : English Comprehension

Q.1 Select the most appropriate ANTONYM of the given word.

Abundant

- Ans 1. Minimal
 2. Fertile
 3. Plentiful
 4. Aplenty

Question ID : 26433060895
Status : Answered
Chosen Option : 1

Q.2 Select the option that expresses the given sentence in passive voice.

somebody is following us.

- Ans 1. Somebody is following us.
 2. We're being followed by somebody.
 3. Somebody had been following us.
 4. We have been following by somebody.

Question ID : 26433089116
Status : Answered
Chosen Option : 4

Q.3 Select the most appropriate meaning of the given idiom.

Fair-weather friends

- Ans 1. A person who is friends with you every day
 2. A person whose friendship cannot be relied on in times
 3. A person who is friends with you in difficult times
 4. A person who is friends with you during the night

Question ID : 26433070684
Status : Answered
Chosen Option : 3

Q.4 Select the option that expresses the given sentence in passive voice.

The child broke many toys in the shop. He even threw the paintings.

- Ans 1. Many toys in the shop were broken by the child. Even the paintings have been thrown by him.
 2. Many toys in the shop were broken by the child. He has even thrown the paintings.
 3. Many toys in the shop were broken by the child. Even the paintings were thrown by him.
 4. Many toys in the shop have been broken by the child. Even the paintings were thrown by him.

Question ID : 26433088548
Status : Answered
Chosen Option : 1

Q.5 Select the correct spelling of the underlined word from the following options.

Handover that peace of paper to me so that I can evaluate the authenticity of his amorous claims.

- Ans
- 1. peices
 - 2. pieces
 - 3. peice
 - 4. piece

Question ID : 26433061045
Status : Answered
Chosen Option : 3

Q.6 Select the correct direct form of the given sentence.
The doctor said that they had performed their bit.

- Ans
- 1. The doctor said, "We are performing our bit."
 - 2. The doctor says, "We had performed our bit."
 - 3. The doctor said, "We have performed our bit."
 - 4. The doctor said, "We performed our bit."

Question ID : 264330104633
Status : Answered
Chosen Option : 1

Q.7 Select the option that can be used as a one-word substitute for the given group of words.

Something which is worth believing

- Ans
- 1. Spurious
 - 2. Impending
 - 3. Expedient
 - 4. Credible

Question ID : 26433071765
Status : Answered
Chosen Option : 4

Q.8 Rearrange the parts of the sentence in correct order.

We looked for
P. strong relationships at locations in the
Q. genome that are not well studied in
R. apple and looked for which compounds we
S. could identify and which had nutritional value

- Ans
- 1. PQRS
 - 2. SPQR
 - 3. QRPS
 - 4. QSRP

Question ID : 264330104664
Status : Answered
Chosen Option : 3

Q.9 Sentences of a paragraph are given below in jumbled order. Arrange the sentences in the correct order to form a meaningful and coherent paragraph.

A.It is considered the biggest carnival event in the world.

B.Rio carnival is celebrated every year before lent.

C.A typical Rio carnival is filled with floats, revelers and adornments from numerous Samba schools in Rio.

D.Every school is specially ordered to follow their parade entries.

Ans 1. BCDA

2. ACDB

3. BACD

4. ABDC

Question ID : 26433072384

Status : Answered

Chosen Option : 2

Q.10 The question below consists of a set of labeled sentences. Out of the four options given, select the most logical order of the sentences to form a coherent paragraph.

P. The division was usually based on temperature, which allows for different vegetation growth.

Q. Köppen's map used different colors and shades to represent the different climate zones of the world.

R. Wladimir Köppen developed a climate classification system at the end of the 19th century.

S. The system divides the world into five climate zones.

Ans 1. RPQS

2. SPQR

3. RSPQ

4. QPSR

www.shikarat.com

Question ID : 264330104722

Status : Answered

Chosen Option : 3

Q.11 Select the INCORRECTLY spelt word.

Ans 1. Laproscopy

2. Intermittent

3. Guise

4. Generate

Question ID : 26433063148

Status : Answered

Chosen Option : 2

Q.12 Select the most appropriate collocating word to fill in the blank.

The girl has _____ chances winning the match.

Ans 1. bountiful

2. light

3. high

4. hefty

Question ID : 26433070452

Status : Answered

Chosen Option : 3

Q.13 The following sentence has been split into four segments. Identify the segment that contains a grammatical error.

A book market / was been operated by some readers / in the street when / they reached there.

- Ans 1. was been operated by some readers
 2. A book market
 3. they reached there.
 4. in the street when

Question ID : 26433091952
Status : Answered
Chosen Option : 1

Q.14 Select the sentence that uses the idiom correctly.

- Ans 1. Walking bare feet on grass gave him cold feet.
 2. Ranita was not selected for the job as she got cold feet.
 3. After too much cycling Arun got cold feet.
 4. One can swim easily with cold feet.

Question ID : 26433060376
Status : Answered
Chosen Option : 1

Q.15 The following sentence has been split into four segments. Identify the segment that contains a grammatical error.

Children listens to people / speaking around them / for a long time before / they begin to speak.

- Ans 1. speaking around them
 2. for a long time before
 3. they begin to speak
 4. Children listens to people

Question ID : 26433092271
Status : Answered
Chosen Option : 3

Q.16 Rearrange the parts of the sentence in correct order.

The issue of
P. compulsory vaccination is difficult
Q. multiple interests all protected by human
R. because the governments need to consider
S. rights law and strike a fair balance between them

- Ans 1. QSPR
 2. PQRS
 3. PRQS
 4. RSPQ

Question ID : 264330104677
Status : Answered
Chosen Option : 2

Q.17 Select the most appropriate synonym of the underlined word in the given sentence.

Try to be frugal with your hard-earned money.

- Ans
- 1. Imprudent
 - 2. Negligent
 - 3. Economical
 - 4. Honest

Question ID : 26433071962
Status : Answered
Chosen Option : 3

Q.18 Select the most appropriate synonym of the underlined word.

No one was prepared for the environmental calamity that hit the town in the middle of the night.

- Ans
- 1. Catastrophe
 - 2. Stress
 - 3. Degradation
 - 4. Damage

Question ID : 26433071778
Status : Answered
Chosen Option : 3

Q.19 Select the most appropriate synonym of the given word.

Demolish

- Ans
- 1. Create
 - 2. Ruin
 - 3. Shape
 - 4. Fabricate

Question ID : 26433071873
Status : Answered
Chosen Option : 2

Q.20 Select the most appropriate option to fill in the blank.

The crowing witch released a _____cackle as she turned the boy into a beast.

- Ans
- 1. soft
 - 2. low
 - 3. gentle
 - 4. loud

Question ID : 26433059586
Status : Answered
Chosen Option : 4

Comprehension:

In the following passage, some words have been deleted. Read the passage carefully and select the most appropriate option to fill in each blank.

Swaminathan had a table on which all his things, his coat, cap, slate, ink-bottle, and books, were thrown in a confused (1)_____. He sat on his stool and shut his eyes to (2) _____ what work he had for the day: first of course there was Arithmetic – those five (3)_____ in Profit and Loss; then there was English – he had to copy down a page from his English lesson and write dictionary meanings of (4) _____ words; and then there was Geography. And only two hours before him to do all this heap of work and get (5) _____ for school.

SubQuestion No : 21

Q.21 Select the most appropriate option to fill in blank number 1.

- Ans
- 1. load
 - 2. order
 - 3. deal
 - 4. heap

Question ID : 26433081345

Status : Answered

Chosen Option : 2

Comprehension:

In the following passage, some words have been deleted. Read the passage carefully and select the most appropriate option to fill in each blank.

Swaminathan had a table on which all his things, his coat, cap, slate, ink-bottle, and books, were thrown in a confused (1)_____. He sat on his stool and shut his eyes to (2) _____ what work he had for the day: first of course there was Arithmetic – those five (3)_____ in Profit and Loss; then there was English – he had to copy down a page from his English lesson and write dictionary meanings of (4) _____ words; and then there was Geography. And only two hours before him to do all this heap of work and get (5) _____ for school.

SubQuestion No : 22

Q.22 Select the most appropriate option to fill in blank number 2.

- Ans
- 1. recollect
 - 2. imagine
 - 3. guess
 - 4. estimate

Question ID : 26433081346

Status : Answered

Chosen Option : 4

Comprehension:

In the following passage, some words have been deleted. Read the passage carefully and select the most appropriate option to fill in each blank.

Swaminathan had a table on which all his things, his coat, cap, slate, ink-bottle, and books, were thrown in a confused (1)_____. He sat on his stool and shut his eyes to (2) _____ what work he had for the day: first of course there was Arithmetic – those five (3)_____ in Profit and Loss; then there was English – he had to copy down a page from his English lesson and write dictionary meanings of (4) _____ words; and then there was Geography. And only two hours before him to do all this heap of work and get (5) _____ for school.

SubQuestion No : 23

Q.23 Select the most appropriate option to fill in blank number 3.

- Ans 1. debates
 2. disputes
 3. puzzles
 4. conditions

Question ID : 26433081347

Status : Answered

Chosen Option : 3

Comprehension:

In the following passage, some words have been deleted. Read the passage carefully and select the most appropriate option to fill in each blank.

Swaminathan had a table on which all his things, his coat, cap, slate, ink-bottle, and books, were thrown in a confused (1)_____. He sat on his stool and shut his eyes to (2) _____ what work he had for the day: first of course there was Arithmetic – those five (3)_____ in Profit and Loss; then there was English – he had to copy down a page from his English lesson and write dictionary meanings of (4) _____ words; and then there was Geography. And only two hours before him to do all this heap of work and get (5) _____ for school.

SubQuestion No : 24

Q.24 Select the most appropriate option to fill in blank number 4.

- Ans 1. difficult
 2. rigid
 3. awkward
 4. visible

Question ID : 26433081348

Status : Answered

Chosen Option : 1

Comprehension:

In the following passage, some words have been deleted. Read the passage carefully and select the most appropriate option to fill in each blank.

Swaminathan had a table on which all his things, his coat, cap, slate, ink-bottle, and books, were thrown in a confused (1)_____. He sat on his stool and shut his eyes to (2) _____ what work he had for the day: first of course there was Arithmetic – those five (3)_____ in Profit and Loss; then there was English – he had to copy down a page from his English lesson and write dictionary meanings of (4) _____ words; and then there was Geography. And only two hours before him to do all this heap of work and get (5) _____ for school.

SubQuestion No : 25

Q.25 Select the most appropriate option to fill in blank number 5.

- Ans
- 1. fixed
 - 2. fit
 - 3. ready
 - 4. alert

www.shikarat.com

Question ID : **26433081349**

Status : **Answered**

Chosen Option : **3**